

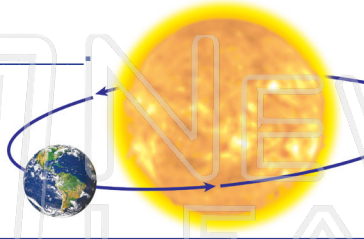


# The Sun and Earth

Sci  
B

Name \_\_\_\_\_ Class \_\_\_\_\_ Date \_\_\_\_\_

1 Everything in our **solar system** moves **around** the \_\_\_\_\_



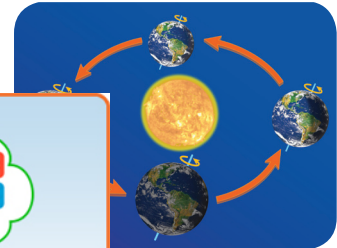
6 As the Earth moves around the Sun, it **turns on its axis**. This is called \_\_\_\_\_



2 Which gives Earth **light and heat**? Circle it.



7 The rotation of the Earth on its axis causes the seasons. **Name the four seasons on Earth.**




3 Living things get \_\_\_\_\_ the Sun. \_\_\_\_\_ **energy** from the Sun.



## PREVIEW

Please [Sign In](#) or [Sign Up](#) to download the printable version of this worksheet

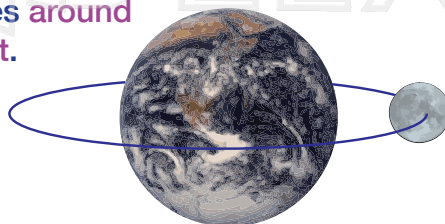
4 Earth is the \_\_\_\_\_ planet from the Sun.



9 Which **season** is the time of year when the weather is the **warmest**?



5 An \_\_\_\_\_ is the **path** that a planet makes **around another planet**.



10 When it is **light on one side** of the Earth, it is **dark on the other side** of the Earth. True or false? Circle the correct answer.

**true**

**false**



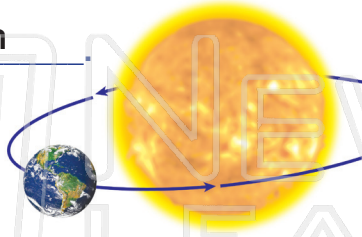
# The Sun and Earth - Answer Key

Sci  
B

Name \_\_\_\_\_ Class \_\_\_\_\_ Date \_\_\_\_\_

1 Everything in our **solar system** moves

**around** the     Sun    



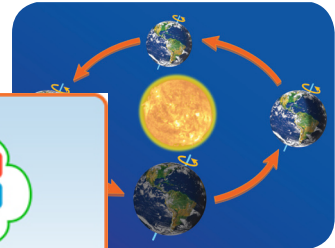
6 As the Earth moves around the Sun, it **turns on its axis**. This is called     rotation    .



2 Which gives Earth **light and heat**? Circle it.



7 The rotation of the Earth on its axis causes the seasons. **Name the four seasons on Earth.**



3 Living things get **energy** from the Sun. **light**

light




## PREVIEW

Please [Sign In](#) or [Sign Up](#) to download the printable version of this worksheet



4 Earth is the     third     planet from the Sun.

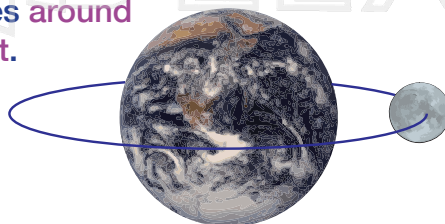


9 Which **season** is the time of year when the weather is the **warmest**?

    summer    



5 An     orbit     is the **path** that a planet makes **around another planet**.



10 When it is **light on one side** of the Earth, it is **dark on the other side** of the Earth. True or false? Circle the correct answer.

    true    

false