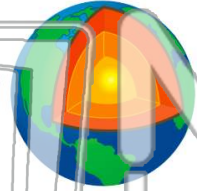




Name _____ Class _____ Date _____

1 How many **main layers** is the **earth** made up of?

- A one main layer
- B three main layers
- C two main layers
- D ten main layers



2 We live on the **outer layer** of the **earth** called the _____.

- A outer core
- B core
- C mantle
- D crust



3 What is the **crust** of the earth made of?

4 **Under the earth's crust** is the layer called the _____.



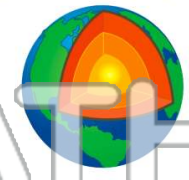
PREVIEW

Please [Sign In](#) or [Sign Up](#) to download the printable version of this worksheet

7 _____ core is packed together so tightly it is _____.

- A rocks
- B fire
- C metal
- D lava

- A liquid
- B solid
- C melted
- D water

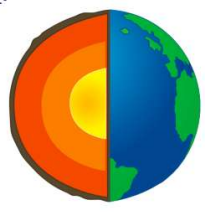


9 The **outer section** of the **earth's core** is _____.

10 _____ are the many different solid features formed on top of the earth's **crust**.

- A solid rock
- B cooled liquid
- C hot, thick liquid
- D thick rock

- A Resources
- B Mountains
- C Layers
- D Landforms

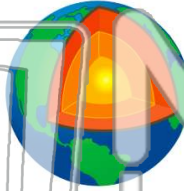




Name _____ Class _____ Date _____

1 How many **main layers** is the **earth** made up of?

- A one main layer
- B three main layers
- C two main layers
- D ten main layers



2 We live on the **outer layer** of the **earth** called the _____.

- A outer core
- B core
- C mantle
- D crust



3 What is the **crust** of the earth made of?

4 **Under the earth's crust** is the layer called the _____.



PREVIEW

Please [Sign In](#) or [Sign Up](#) to download the printable version of this worksheet

7 _____ core is packed together so tightly it is _____.

- A rocks
- B fire
- C metal
- D lava

- A liquid
- B solid
- C melted
- D water



9 The **outer section** of the **earth's core** is _____.

10 _____ are the many different solid features formed on top of the earth's **crust**.

- A solid rock
- B cooled liquid
- C hot, thick liquid
- D thick rock

- A Resources
- B Mountains
- C Layers
- D Landforms

