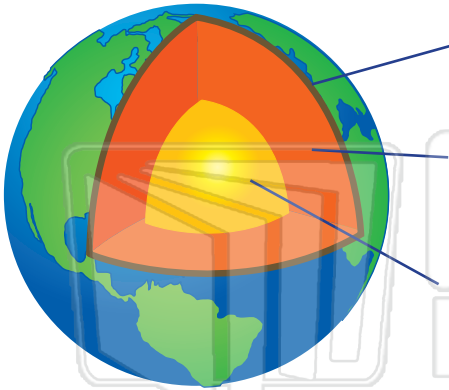





Name _____ Class _____ Date _____

1 Label the three **main layers** of the Earth.



6 A _____ is a **large, mostly flat area of land**.



7 A _____ is a natural **body of flowing water** that is larger than a brook or a creek.



2 What two kinds of **rock** is the **Earth's mantle** made of? Circle them.



PREVIEW

Please [Sign In](#) or [Sign Up](#) to download the printable version of this worksheet

3 T

4 d
th
a



is a
st
ke and

vibrate violently.



5 A _____ is a **slow-moving, large body of ice**.



10 What do we call the **process** in which land that has been **weathered, moves and shifts over time**? It can be caused by water, wind, gravity, and glaciers.



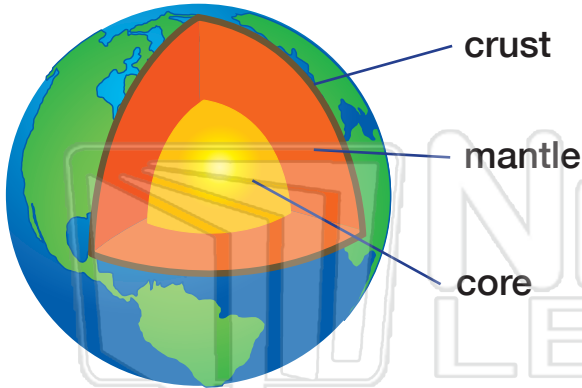


Changes on Earth - Answer Key


Sci
C

Name _____ Class _____ Date _____

1 Label the three **main layers** of the Earth.



6 A _____ **plain** _____ is a **large, mostly flat area of land.**



7 A _____ **river** _____ is a natural **body of flowing water** that is larger than a brook or a creek.



2 What two kinds of **rock** is the **Earth's mantle** made of? Circle them.



3 T

4

PREVIEW

Please [Sign In](#) or [Sign Up](#) to download the printable version of this worksheet



is a
st
ke and



5 A _____ **glacier** _____ is a **slow-moving, large body of ice.**



vibrate violently.

10 What do we call the **process** in which land that has been **weathered, moves and shifts over time**? It can be caused by water, wind, gravity, and glaciers.



erosion