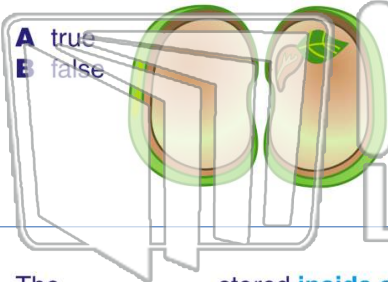




Name _____ Class _____ Date _____


1 From the **seed**, the leaves, stem, and roots of the plant grow.

- A true
- B false



2 Seeds contain _____ which helps the new plant begin to grow.

- A three leaves
- B food
- C a large stem
- D thick roots



3 The _____ stored **inside a seed** helps the plant germinate and grow.

4 A seed stays inactive and doesn't start growing until the **conditions** surrounding it are _____.

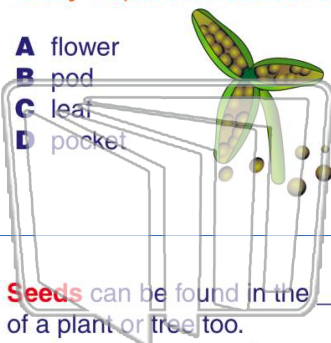


PREVIEW

Please [Sign In](#) or [Sign Up](#) to download the printable version of this worksheet

7 _____ is **dry** it opens to release its **seeds**.

- A flower
- B pod
- C leaf
- D pocket



_____ pod contain:

- A one
- B two seeds
- C thousands of seeds
- D Some pods have few seeds, others have many.



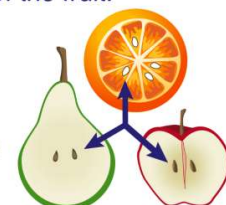
9 **Seeds** can be found in the _____ of a plant or tree too.

- A fruit
- B stem
- C leaf
- D roots



10 The **arrow** is pointing to the _____ of the fruit.

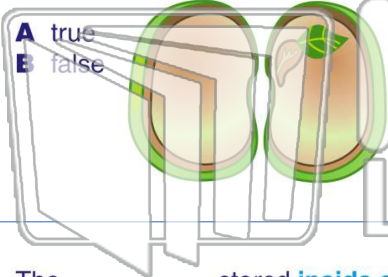
- A leaf
- B roots
- C seeds
- D cotyledons





Name _____ Class _____ Date _____


1 From the **seed**, the leaves, stem, and roots of the plant grow.



- A true
- B false

2 Seeds contain _____ which helps the new plant begin to grow.

- A three leaves
- B food
- C a large stem
- D thick roots



3 The _____ stored **inside a seed** helps the plant germinate and grow.

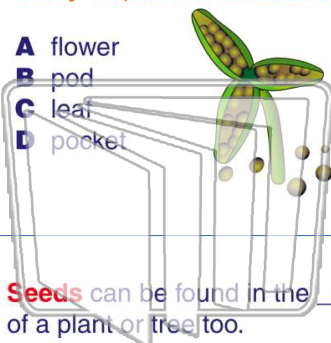
4 A seed stays inactive and doesn't start growing until the **conditions** surrounding it are _____.

PREVIEW

Please [Sign In](#) or [Sign Up](#) to download the printable version of this worksheet

7 _____ is dry if it opens to release its seeds.

- A flower
- B pod
- C leaf
- D pocket



8 _____ pod contain:

- A one
- B two seeds
- C thousands of seeds
- D Some pods have few seeds, others have many.



9 **Seeds** can be found in the _____ of a plant or tree too.

- A fruit
- B stem
- C leaf
- D roots



10 The **arrow** is pointing to the _____ of the fruit.

- A leaf
- B roots
- C seeds
- D cotyledons

