

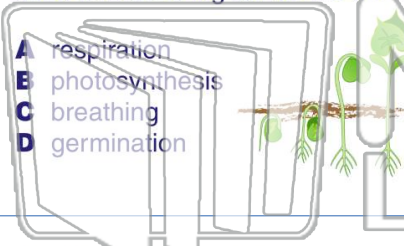


Name \_\_\_\_\_ Class \_\_\_\_\_ Date \_\_\_\_\_

1

What is the **process** by which the plant **embryo** grows from inside the seed to a seedling above the soil?

- A respiration
- B photosynthesis
- C breathing
- D germination



2

A \_\_\_\_\_ is a **young plant** that is in its early stages of growth.

- A root
- B seedling
- C stem
- D pod



3

What is the name for the **process** of a plant as it grows, flowers, sets seed, and dies?



4

How many growing seasons does it take an **annual plant** to complete its life cycle?



5



## PREVIEW

Please [Sign In](#) or [Sign Up](#) to download the printable version of this worksheet

7

and then grow into new plants where they land.

- A many insects
- B its roots
- C the leaf of a plant
- D the wind



plant can grow. Which of these is an example of a **tuber**?


- A a potato
- B a watermelon
- C a daisy
- D a zucchini



9

**Ferns** do not have seeds. How do ferns reproduce?

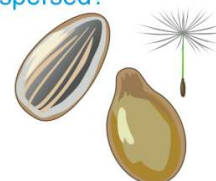
- A spores
- B seeds
- C flowers
- D stems



10

Seeds may be **dispersed** in a number of ways. Which is **not** a way seeds are dispersed?

- A sun
- B wind
- C animals
- D water

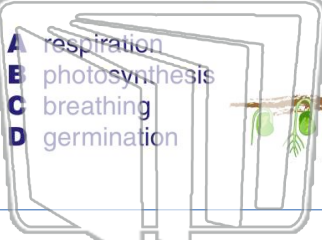




Name \_\_\_\_\_ Class \_\_\_\_\_ Date \_\_\_\_\_

1

What is the **process** by which the plant **embryo** grows from inside the seed to a seedling above the soil?



- A respiration
- B photosynthesis
- C breathing
- D germination

2

A \_\_\_\_\_ is a **young plant** that is in its early stages of growth.

- A root
- B seedling
- C stem
- D pod



3

What is the name for the **process** of a plant as it grows, flowers, sets seed, and dies?



4

How many growing seasons does it take an **annual plant** to complete its life cycle?



5



## PREVIEW

Please [Sign In](#) or [Sign Up](#) to download the printable version of this worksheet

7

and then grow into new plants where they land.

- A many insects
- B its roots
- C the leaf of a plant
- D the wind



plant can grow. Which of these is an example of a **tuber**?


- A a potato
- B a watermelon
- C a daisy
- D a zucchini



9

**Ferns** do not have seeds. How do ferns reproduce?

- A spores
- B seeds
- C flowers
- D stems



10

Seeds may be **dispersed** in a number of ways. Which is **not** a way seeds are dispersed?

- A sun
- B wind
- C animals
- D water

