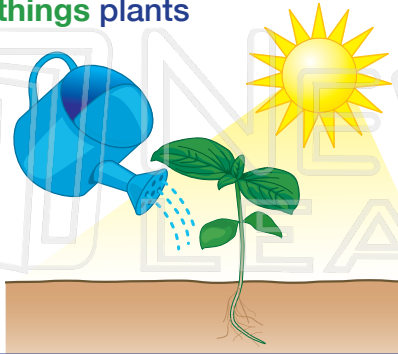




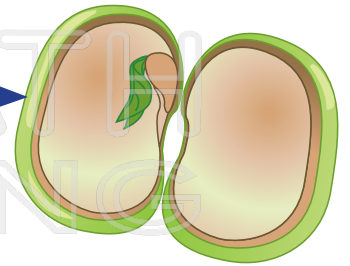
How do Plants Grow?

Name _____ Class _____ Date _____

1 What do plants need in order to **grow**? Name at least **3 things** plants need to grow.



6 What **part of the seed** is the arrow pointing to in the diagram?




2 If a plant gets **too much** of something it needs to grow, such as water, it can **die**.

Circle the

true

7 The _____ **protects the young plant** inside the _____ of the _____ to grow.

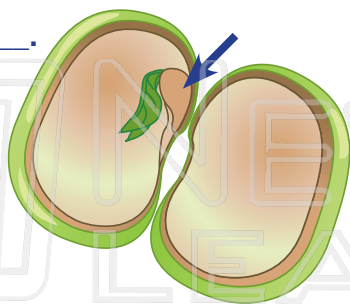


3 Many pla

PREVIEW

Please [Sign In](#) or [Sign Up](#) to download the printable version of this worksheet

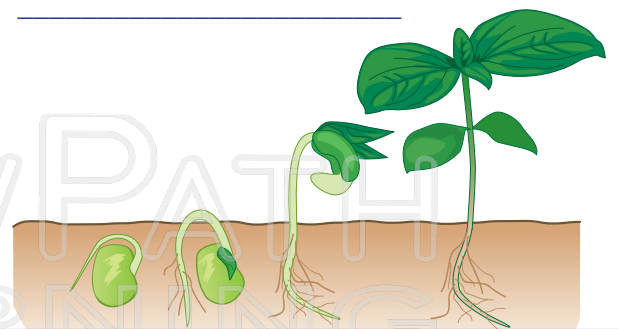
4 A **seed** is made up of three parts: the **seed coat**, **cotyledon**, and _____.



_____ which the _____ inside the _____ the soil? _____ seed to a seedling above the soil?

5 Seeds contain _____ which helps the new plant begin to grow. It is **stored** in the **cotyledon**.

10 What is the name for the process of a plant as it **grows, flowers, sets seed, and dies**? _____



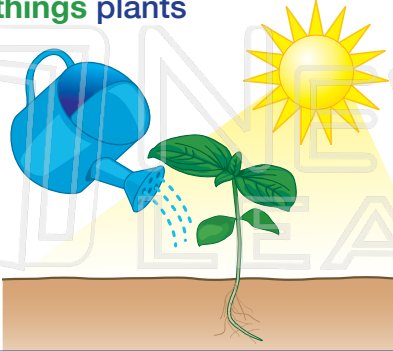


How do Plants Grow? - Answer Key

Name _____ Class _____ Date _____

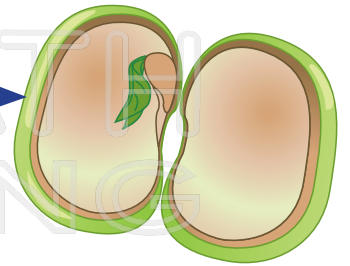
1 What do plants need in order to **grow**?
Name at least **3 things** plants need to grow.

water,
sunshine,
nutrients,
soil, air



6 What **part of the seed** is the arrow pointing to in the diagram?

seed coat →



2 If a plant gets **too much** of something it needs to grow, such as water, it can **die**.


Circle the

true



PREVIEW

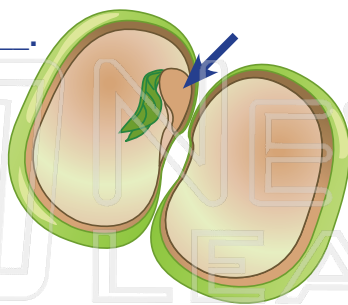
Please [Sign In](#) or [Sign Up](#) to download the printable version of this worksheet



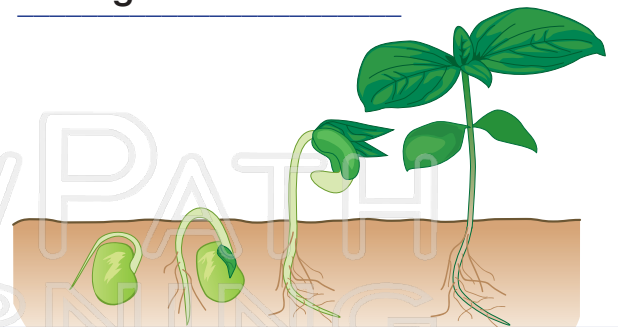
3 Many plants
seeds

which the
inside the
the soil?

4 A **seed** is made up of three parts:
the **seed coat**, **cotyledon**, and
embryo.



germination



5 Seeds contain _____ **food** _____ which helps the new plant begin to grow. It is **stored** in the **cotyledon**.

10 What is the name for the process of a plant as it **grows, flowers, sets seed, and dies**?

life cycle