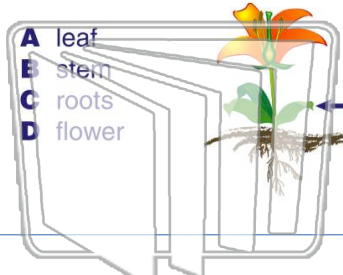




Name \_\_\_\_\_ Class \_\_\_\_\_ Date \_\_\_\_\_

1 What is the **arrow** on the diagram pointing to on the plant?



2 Plant \_\_\_\_\_ have many jobs. One job is to **take in sunshine**, which the plant needs to make food and to live.

- A leaves
- B stems
- C roots
- D root hairs



3 What do **leaves** have in them which allow air and water to move in and out of the plant?


4 Leaves contain \_\_\_\_\_, which is the **green substance** that gives green plants their color.



## PREVIEW

Please [Sign In](#) or [Sign Up](#) to download the printable version of this worksheet

7 photosynthesis, which is needed for a plant to make its own food?



8 Plants take in **carbon dioxide** and give out **oxygen**, which a plant then takes in through its leaves.

- A true
- B false



9 What do plants release into the air during the process of **photosynthesis**?

- A oxygen
- B carbon dioxide
- C water
- D helium



10 The main job of the \_\_\_\_\_ of a plant is to **make seeds**. New plants grow from seeds.

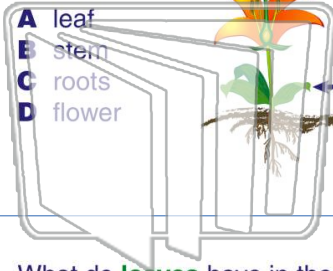
- A flower
- B stem
- C leaves
- D roots





Name \_\_\_\_\_ Class \_\_\_\_\_ Date \_\_\_\_\_

1 What is the **arrow** on the diagram pointing to on the plant?



2 Plant \_\_\_\_\_ have many jobs. One job is to **take in sunshine**, which the plant needs to make food and to live.

- A leaves
- B stems
- C roots
- D root hairs



3 What do **leaves** have in them which allow air and water to move in and out of the plant?

4 Leaves contain \_\_\_\_\_, which is the **green substance** that gives green plants their color.

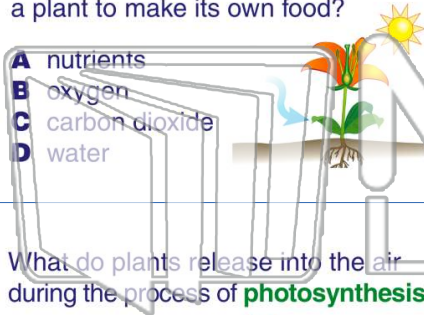


## PREVIEW

Please [Sign In](#) or [Sign Up](#) to download the printable version of this worksheet

7 photosynthesis, which is needed for a plant to make its own food?

- A nutrients
- B oxygen
- C carbon dioxide
- D water



8 \_\_\_\_\_ out **oxygen**, which a plant then takes in through its leaves.

- A true
- B false



9 What do plants release into the air during the process of **photosynthesis**?

- A oxygen
- B carbon dioxide
- C water
- D helium



10 The main job of the \_\_\_\_\_ of a plant is to **make seeds**. New plants grow from seeds.

- A flower
- B stem
- C leaves
- D roots

