





Main Parts of of Plants

Sci
C

Name _____ Class _____ Date _____

1 What part of the plant is the **arrow** pointing to?



6 Plant _____ have many jobs. One job is to **take in sunshine**, which the plant needs to **make food** and to live.



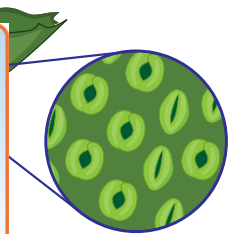
2 Describe two important jobs or functions of a **plant's roots**.

7 What do **leaves** have in them which **allow air and**

3 What part of the plant is the **arrow** pointing to?

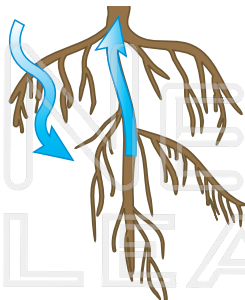
PREVIEW

Please [Sign In](#) or [Sign Up](#) to download the printable version of this worksheet

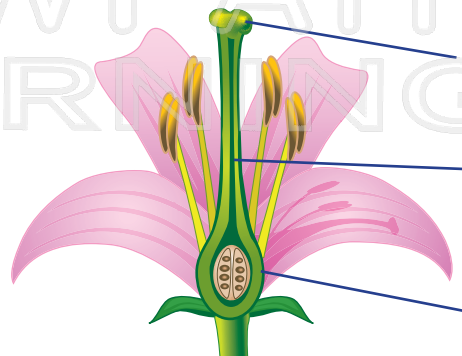


_____ is the part of the plant that **makes food** from the **sunlight** and **air**.

4 What part of a plant **takes in water** from the soil, which a plant needs to live and grow?



10 The _____ of a flower is made up of three main parts: the **stigma**, **style**, and **ovary**. Label them on the flower.



5 A plant's _____ **carries the water and nutrients** that are taken in by the plant's roots to the rest of the plant.




Main Parts of Plants - Answer Key

Sci
C

Name _____ Class _____ Date _____

1 What part of the plant is the **arrow** pointing to?



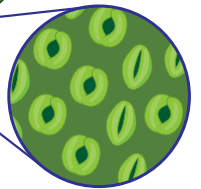
6 Plant _____ leaves _____ have many jobs. One job is to **take in sunshine**, which the plant needs to **make food** and to live.



2 Describe two important jobs or functions of a **plant's roots**.

Keep the
Absorb
the soil.
Store fo

7 What do **leaves** have in them which **allow air and**



3 What part of the plant is the **arrow** pointing to?

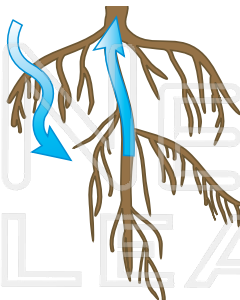
PREVIEW

Please [Sign In](#) or [Sign Up](#) to download the printable version of this worksheet

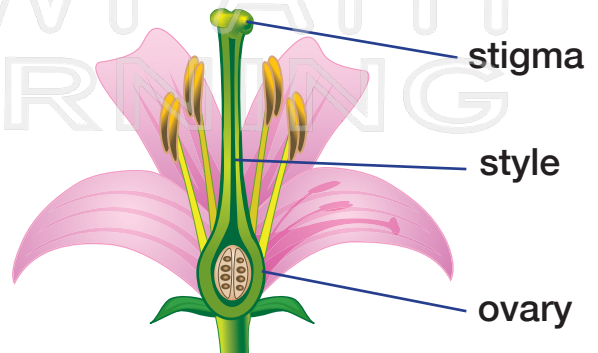
_____ is the
plant **makes**
from the
and air.

_____ of a flower is made up of two main parts: the **anther** and the **filament**.

4 What part of a plant **takes in water** from the soil, which a plant needs to live and grow?



10 The _____ **pistil** _____ of a flower is made up of three main parts: the **style**, **stigma**, and **ovary**. Label them on the flower.



5 A plant's _____ **stem** _____ **carries the water and nutrients** that are taken in by the plant's roots to the rest of the plant.