




Name _____ Class _____ Date _____

1 Two properties of minerals are the color of the **streak** it leaves behind if it is rubbed against another surface and its **hardness**. What is the **hardest** mineral of them all?

A a diamond
B sodium
C gold
D copper



2 **Gold and silver** are very rare _____.

A vitamins
B minerals
C rocks
D gases



3 We need **minerals** in our bodies to stay healthy. We eat minerals when we eat **vegetables**.



4 Copper, lead, fluorite, and _____ are examples of **minerals**.




5

PREVIEW

Please [Sign In](#) or [Sign Up](#) to download the printable version of this worksheet

7 **and nutrients**, supports all the plants on earth.

- A Leaves
- B Soil
- C Rocks
- D Trees




provides and **water** it stores; plants could **not survive** on earth in many areas.

- A true
- B false



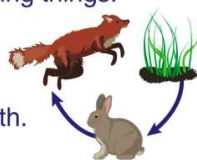
9 Soil is made up of **three main layers**: **topsoil**, **subsoil**, and _____.

- A bedrock
- B decay
- C mud
- D sedimentary



10 Why is **soil** so **important**?

- A It supports all living things.
- B It supports all nonliving things.
- C It is brown.
- D It covers the earth.






Name _____ Class _____ Date _____

1 Two properties of minerals are the color of the **streak** it leaves behind if it is rubbed against another surface and its **hardness**. What is the **hardest** mineral of them all?

- A a diamond
- B sodium
- C gold
- D copper



2 **Gold and silver** are very rare _____.

- A vitamins
- B minerals
- C rocks
- D gases



3 We need **minerals** in our bodies to stay healthy. We eat minerals when we eat **vegetables**.



4 Copper, lead, fluorite, and _____ are examples of **minerals**.




PREVIEW

Please [Sign In](#) or [Sign Up](#) to download the printable version of this worksheet

7 **and nutrients**, supports all the plants on earth.

- A Leaves
- B Soil
- C Rocks
- D Trees



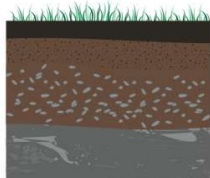
provides and **water** it stores, plants could **not survive** on earth in many areas.

- A true
- B false



9 Soil is made up of **three main layers**: **topsoil**, **subsoil**, and _____.

- A bedrock
- B decay
- C mud
- D sedimentary



10 Why is **soil** so **important**?

- A It supports all living things.
- B It supports all nonliving things.
- C It is brown.
- D It covers the earth.

