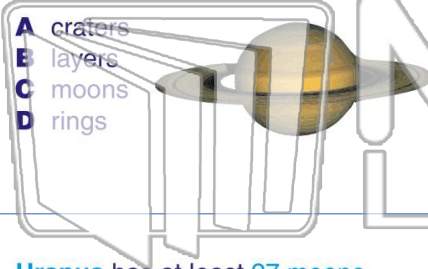




Name _____ Class _____ Date _____


1 **Saturn** has _____ made of ice and rock which circle the planet.

- A craters
- B layers
- C moons
- D rings



2 What is the **seventh planet** from the Sun?

- A Pluto
- B Neptune
- C Uranus
- D Saturn



3 **Uranus** has at least 27 moons.

- A true

4 The **eighth planet** from the Sun is _____.

5

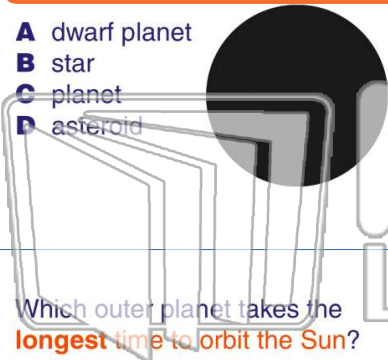


PREVIEW

Please [Sign In](#) or [Sign Up](#) to download the printable version of this worksheet

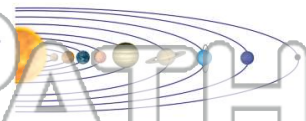
7

- A dwarf planet
- B star
- C planet
- D asteroid



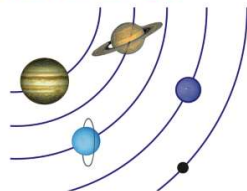
_____ time to orbit around the sun.

- A longer
- B shorter
- C closer
- D faster



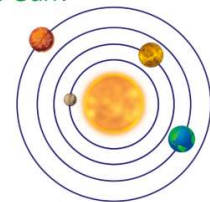
9 Which outer planet takes the **longest** time to orbit the Sun?

- A Neptune
- B Uranus
- C Jupiter
- D Saturn



10 Which planet takes the **shortest** time to orbit the Sun?

- A Mercury
- B Mars
- C Saturn
- D Earth

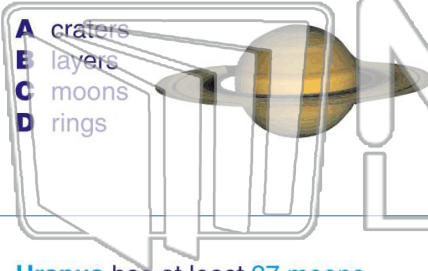




Name _____ Class _____ Date _____


1 **Saturn** has _____ made of ice and rock which circle the planet.

- A craters
- B layers
- C moons
- D rings



2 What is the **seventh planet** from the Sun?

- A Pluto
- B Neptune
- C Uranus
- D Saturn



3 **Uranus** has at least 27 moons.

- A true

4 The **eighth planet** from the Sun is _____.

5

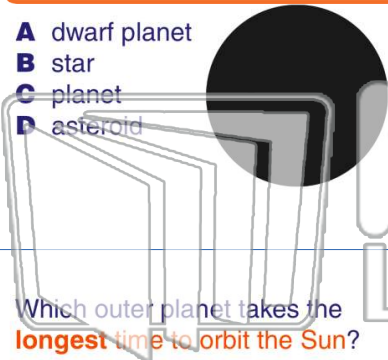


PREVIEW

Please [Sign In](#) or [Sign Up](#) to download the printable version of this worksheet

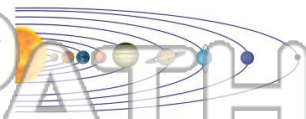
7

- A dwarf planet
- B star
- C planet
- D asteroid



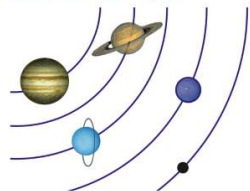
_____ time to orbit around the sun.

- A longer
- B shorter
- C closer
- D faster



9 Which outer planet takes the **longest** time to orbit the Sun?

- A Neptune
- B Uranus
- C Jupiter
- D Saturn



10 Which planet takes the **shortest** time to orbit the Sun?

- A Mercury
- B Mars
- C Saturn
- D Earth

