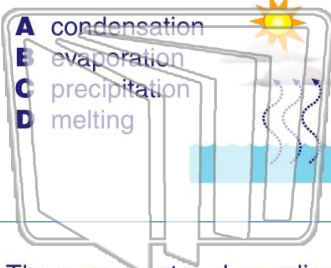




Name _____ Class _____ Date _____

1 What do we call the **process** in which **liquid becomes a gas**?



- A condensation
- B evaporation
- C precipitation
- D melting

2 _____ is the **process** of a **gas turning into a liquid**.

- A Condensation
- B Evaporation
- C Precipitation
- D Water vapor



3 The movement and recycling of the **earth's water** is called the _____. Water moves from the earth to the air

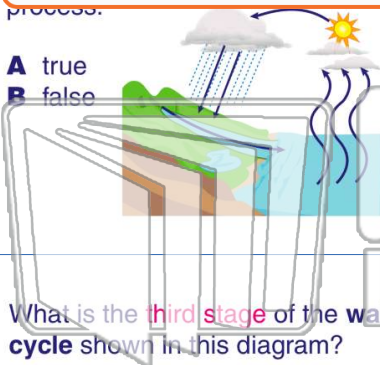
4 Water changes states, or forms, when moving through the **water cycle**. It is in liquid form in the waters on earth



PREVIEW

Please [Sign In](#) or [Sign Up](#) to download the printable version of this worksheet

7 process.



- A true
- B false

8 _____ is the **process** of a **gas turning into a liquid**.

- A evaporation
- B condensation
- C precipitation
- D water flow



9 What is the **third stage** of the **water cycle** shown in this diagram?

- A evaporation
- B condensation
- C precipitation
- D water flow



10 **Water** often has dirt and germs in it so it needs to be _____ in **water treatment plants** before it is pumped through pipes to our homes.

- A warmed
- B turned into ice
- C cleaned
- D changed to the color blue

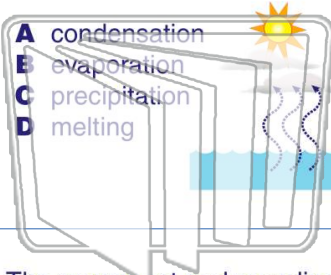




Name _____ Class _____ Date _____

1 What do we call the **process** in which **liquid becomes a gas**?

- A condensation
- B evaporation
- C precipitation
- D melting



2 _____ is the **process** of a **gas turning into a liquid**.

- A Condensation
- B Evaporation
- C Precipitation
- D Water vapor



3 The movement and recycling of the **earth's water** is called the _____. Water moves from the earth to the air

4 Water changes states, or forms, when moving through the **water cycle**. It is in liquid form in the waters on earth

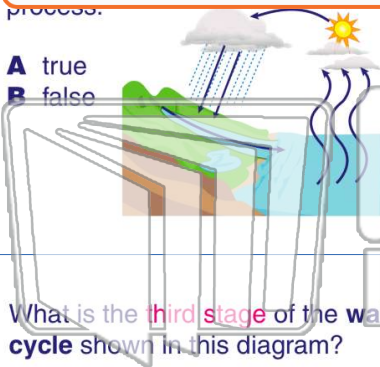


PREVIEW

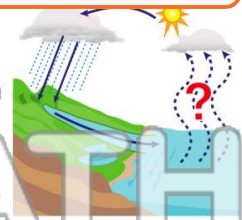
Please [Sign In](#) or [Sign Up](#) to download the printable version of this worksheet

7 process.

- A true
- B false



- A evaporation
- B condensation
- C precipitation
- D water flow



9 What is the **third stage** of the **water cycle** shown in this diagram?

- A evaporation
- B condensation
- C precipitation
- D water flow



10 **Water** often has dirt and germs in it so it needs to be _____ in **water treatment plants** before it is pumped through pipes to our homes.

- A warmed
- B turned into ice
- C cleaned
- D changed to the color blue

