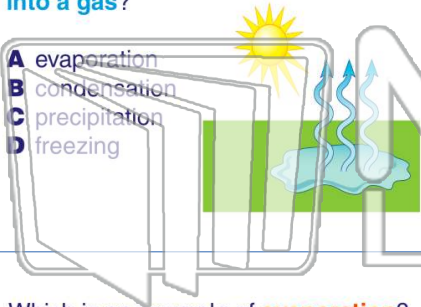




Name _____ Class _____ Date _____

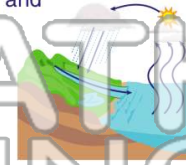
1 What is the changing of a **liquid into a gas**?

- A evaporation
- B condensation
- C precipitation
- D freezing



2 **Evaporation** occurs when the sun **warms** the water in a body of water and some of the water changes into _____, which rises off the water and goes into the air.

- A heat
- B water vapor
- C rain
- D snow



3 Which is an example of **evaporation**?

- A ice cube melting



4 What aids in the evaporation process and is the **process** by which **plants give off water vapor** into the air

5



PREVIEW

Please [Sign In](#) or [Sign Up](#) to download the printable version of this worksheet

7

...as precipitation, and **run off** of hills and mountains into lakes, rivers, and oceans.

- A Water runoff
- B Hail
- C Groundwater
- D Rainfall



...is stored there is called _____.

- A sleet
- B saltwater
- C groundwater
- D precipitation



9

_____ are made up of **saltwater**.

- A Rivers
- B Streams
- C Lakes
- D Oceans



10

How much of the **water** on earth is **saltwater**?

- A 1%
- B 50%
- C 97%
- D 3%

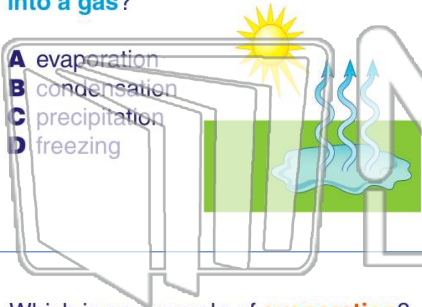




Name _____ Class _____ Date _____

1 What is the changing of a **liquid into a gas**?

- A evaporation
- B condensation
- C precipitation
- D freezing



2 **Evaporation** occurs when the sun **warms** the water in a body of water and some of the water changes into _____, which rises off the water and goes into the air.

- A heat
- B water vapor
- C rain
- D snow



3 Which is an example of **evaporation**?

- A ice cube melting



4 What aids in the evaporation process and is the **process** by which **plants** give off water vapor into the air

5



PREVIEW

Please [Sign In](#) or [Sign Up](#) to download the printable version of this worksheet

7

...as precipitation, and runs off of hills and mountains into lakes, rivers, and oceans.

- A Water runoff
- B Hail
- C Groundwater
- D Rainfall



...is stored there is called _____.

- A sleet
- B saltwater
- C groundwater
- D precipitation



9

_____ are made up of **saltwater**.

- A Rivers
- B Streams
- C Lakes
- D Oceans



10

How much of the **water** on earth is **saltwater**?

- A 1%
- B 50%
- C 97%
- D 3%

