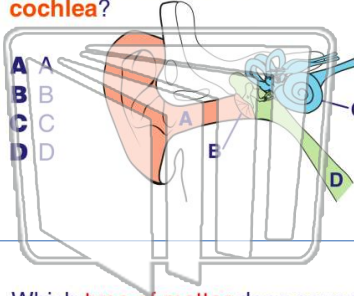




Name _____ Class _____ Date _____

1 This is a diagram of your ear. Which letter is labeling the cochlea?



2 Sound needs something in which to travel. Which of the following is true of sound?

- A can only travel through liquids
- B cannot travel through solids, liquids, and gases
- C can travel through solids, liquids, and gases
- D cannot ever travel through gases



3 Which type of matter does sound travel through the fastest?

4 What is pitch?

- A the highness or lowness



5



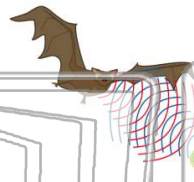
PREVIEW

Please [Sign In](#) or [Sign Up](#) to download the printable version of this worksheet

7

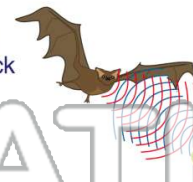
Sound wave bumps into an object and bounces back.

- A echo
- B refraction
- C absorption
- D decibel



an echo is a reflected sound.

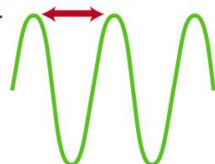
- A is absorbed
- B bounces back
- C is lost
- D gets louder



9

What is a property of sound that refers to the distance between a point on one sound wave and a similar point on another sound wave.

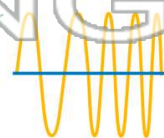
- A pitch
- B frequency
- C wavelength
- D volume



10

Frequency is the number of vibrations in a certain amount of time. Which is true of the frequency of sound?

- A faster vibration = higher frequency
- B faster vibration = lower frequency
- C slower vibration = faster frequency
- D slower vibration = higher frequency

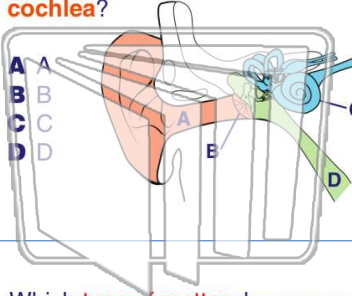




Name _____ Class _____ Date _____

1

This is a diagram of your ear. Which letter is labeling the cochlea?



2

Sound needs something in which to travel. Which of the following is true of sound?

- A can only travel through liquids
- B cannot travel through solids, liquids, and gases
- C can travel through solids, liquids, and gases
- D cannot ever travel through gases



3

Which type of matter does sound travel through the fastest?

4

What is pitch?

- A the highness or lowness



5



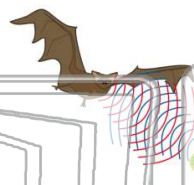
PREVIEW

Please [Sign In](#) or [Sign Up](#) to download the printable version of this worksheet

7

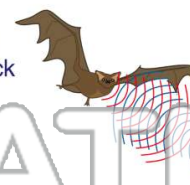
Sound wave bumps into an object and bounces back.

- A echo
- B refraction
- C absorption
- D decibel



an echo is a reflected sound.

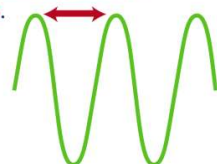
- A is absorbed
- B bounces back
- C is lost
- D gets louder



9

What is a property of sound that refers to the distance between a point on one sound wave and a similar point on another sound wave.

- A pitch
- B frequency
- C wavelength
- D volume



10

Frequency is the number of vibrations in a certain amount of time. Which is true of the frequency of sound?

- A faster vibration = higher frequency
- B faster vibration = lower frequency
- C slower vibration = faster frequency
- D slower vibration = higher frequency

