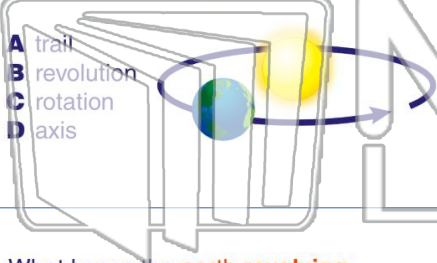




Name _____ Class _____ Date _____

1 A(n) _____ is the **earth moving in a path around the sun**, which results in one year on earth.

- A trail
- B revolution
- C rotation
- D axis



2 _____ is a very **hot and rocky planet** with no moons; its atmosphere is made up of **poisonous gases**.

- A Mars
- B Earth
- C Venus
- D Uranus



3 What keeps the **earth revolving around the sun**?

4 The **path that the earth follows** as it revolves around the sun is called its _____.

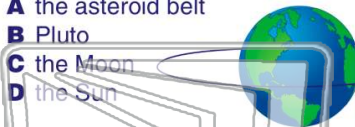


PREVIEW

Please [Sign In](#) or [Sign Up](#) to download the printable version of this worksheet

7 Earth keeps the moon in its orbit.

- A the asteroid belt
- B Pluto
- C the Moon
- D the Sun




moon orbits the earth, _____.

- A the same side of the moon always faces the earth
- B all sides of the moon face earth
- C the moon is not visible from earth
- D the same side of earth faces the moon

9 When the moon is between the earth and the sun, the moon **looks dark**. This **phase** is called the _____, which begins a new set of moon phases.

- A half moon
- B full moon
- C new moon
- D crescent moon



10 After the **new moon**, the moon begins to show in its _____ phase. The moon looks like a **sliver in the sky** during this phase.

- A new moon
- B waxing crescent
- C half moon
- D full moon

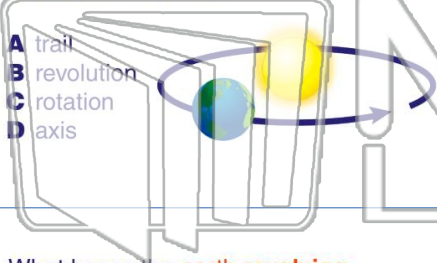




Name _____ Class _____ Date _____

1 A(n) _____ is the **earth moving in a path around the sun**, which results in one year on earth.

- A trail
- B revolution
- C rotation
- D axis



2 _____ is a very **hot and rocky planet** with no moons; its atmosphere is made up of **poisonous gases**.

- A Mars
- B Earth
- C Venus
- D Uranus



3 What keeps the **earth revolving around the sun**?

4 The **path that the earth follows** as it revolves around the sun is called its _____.

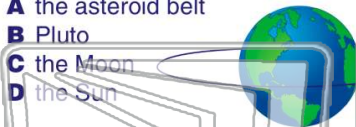


PREVIEW

Please [Sign In](#) or [Sign Up](#) to download the printable version of this worksheet

7 Earth keeps the moon in its orbit.

- A the asteroid belt
- B Pluto
- C the Moon
- D the Sun




moon orbits the earth, _____.

- A the same side of the moon always faces the earth
- B all sides of the moon face earth
- C the moon is not visible from earth
- D the same side of earth faces the moon

9 When the moon is between the earth and the sun, the moon **looks dark**. This **phase** is called the _____, which begins a new set of moon phases.

- A half moon
- B full moon
- C new moon
- D crescent moon



10 After the **new moon**, the moon begins to show in its _____ phase. The moon looks like a **sliver in the sky** during this phase.

- A new moon
- B waxing crescent
- C half moon
- D full moon

