




Name \_\_\_\_\_ Class \_\_\_\_\_ Date \_\_\_\_\_

1 The \_\_\_\_\_ phase of the moon occurs when the side of the moon visible to us on earth appears to be **half-full on its right side.**

A waxing gibbous  
B last quarter  
C full moon  
D first quarter



2 What is the **largest planet** in our solar system?

A Mars  
B Jupiter  
C Mercury  
D Saturn



3 The **rings of Saturn** are made of \_\_\_\_\_.



4 How many **moons** does **Uranus** have?

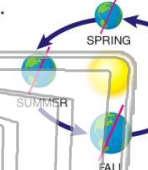



**PREVIEW**

Please [Sign In](#) or [Sign Up](#) to download the printable version of this worksheet

7 \_\_\_\_\_ because of where the earth is in relation to the sun.

A Rain  
B Seasons  
C Wind storms  
D Thunderstorms




8 \_\_\_\_\_ is pointing **away** from the sun on the earth's axis.

A winter  
B summer  
C spring  
D fall




9 The **eighth planet** from the Sun is \_\_\_\_\_ which is made up of **several different types of gases.**

A Saturn  
B Neptune  
C Pluto  
D Jupiter



10 **Pluto** is a \_\_\_\_\_.

A plant  
B dwarf planet  
C comet  
D moon

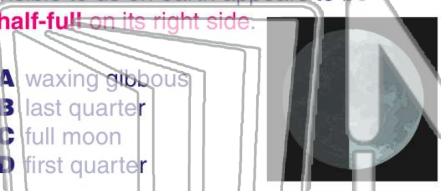




Name \_\_\_\_\_ Class \_\_\_\_\_ Date \_\_\_\_\_

1 The \_\_\_\_\_ phase of the moon occurs when the side of the moon visible to us on earth appears to be **half-full on its right side.**

A waxing gibbous  
B last quarter  
C full moon  
D first quarter



2 What is the **largest planet** in our solar system?

A Mars  
B Jupiter  
C Mercury  
D Saturn



3 The **rings of Saturn** are made of \_\_\_\_\_.



4 How many **moons** does **Uranus** have?

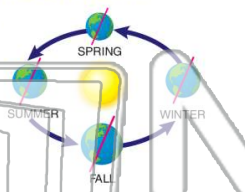


## PREVIEW

Please [Sign In](#) or [Sign Up](#) to download the printable version of this worksheet

7 \_\_\_\_\_ because of where the earth is in relation to the sun.

A Rain  
B Seasons  
C Wind storms  
D Thunderstorms



\_\_\_\_\_ is pointing **away** from the sun on the earth's axis.

A winter  
B summer  
C spring  
D fall



9 The **eighth planet** from the Sun is \_\_\_\_\_ which is made up of **several different types of gases.**

A Saturn  
B Neptune  
C Pluto  
D Jupiter



10 **Pluto** is a \_\_\_\_\_.

A plant  
B dwarf planet  
C comet  
D moon

