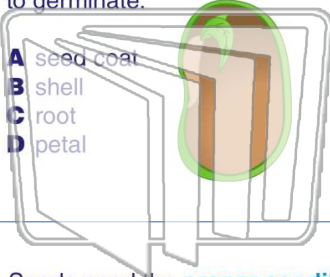




Name _____ Class _____ Date _____

1 A **seed** is **surrounded** and protected by a _____ until it is ready to germinate.

- A seed coat
- B shell
- C root
- D petal



2 What does a **germinating seed** contain?

- A food only
- B a stem only
- C a leaf only
- D leaf, stem, root, and stored food



3 Seeds need the **proper conditions** in order to grow. Which of the following does a seed need in order

4 Which stage of a plant's **life cycle** is labeled **B** on the diagram?



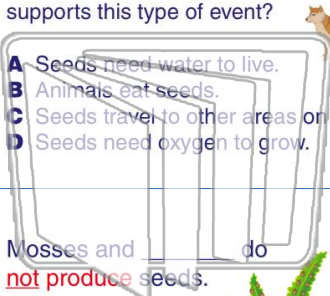
NEW PATH LEARNING

PREVIEW

Please [Sign In](#) or [Sign Up](#) to download the printable version of this worksheet

5 seeds eventually **fall off** the animal and grow in the soil where they fall. Which statement supports this type of event?

- A Seeds need water to live.
- B Animals eat seeds.
- C Seeds travel to other areas on animals.
- D Seeds need oxygen to grow.



6 Look in the picture.

- A Wind blows seeds to other areas to grow.
- B Animals carry seeds to new places.
- C People eat seeds.
- D Animals depend on seeds for survival.



9 Mosses and _____ do **not produce** seeds.

- A oak trees
- B ferns
- C maple trees
- D sunflowers



10 **Mosses and ferns** do **not** produce seeds. What **do** they produce in order to **reproduce**?

- A hooks
- B roots
- C spores
- D fruit

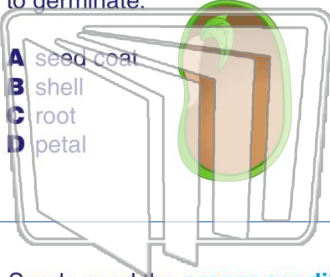




Name _____ Class _____ Date _____

1 A **seed** is **surrounded** and protected by a _____ until it is ready to germinate.

- A seed coat
- B shell
- C root
- D petal



2 What does a **germinating seed** contain?

- A food only
- B a stem only
- C a leaf only
- D leaf, stem, root, and stored food



3 Seeds need the **proper conditions** in order to grow. Which of the following does a seed need in order

4 Which stage of a plant's **life cycle** is labeled **B** on the diagram?




PREVIEW

Please [Sign In](#) or [Sign Up](#) to download the printable version of this worksheet



7 seeds eventually **fall off** the animal and grow in the soil where they fall. Which statement supports this type of event?

- A Seeds need water to live.
- B Animals eat seeds.
- C Seeds travel to other areas on animals.
- D Seeds need oxygen to grow.



8 _____ look in the picture.

- A Wind blows seeds to other areas to grow.
- B Animals carry seeds to new places.
- C People eat seeds.
- D Animals depend on seeds for survival.



9 Mosses and _____ do **not produce** seeds.

- A oak trees
- B ferns
- C maple trees
- D sunflowers



10 **Mosses and ferns** do **not** produce seeds. What **do** they produce in order to **reproduce**?

- A hooks
- B roots
- C spores
- D fruit

