




Name _____ Class _____ Date _____

1

Rocks are made up of **many tiny pieces** of _____.

- A wood
- B minerals
- C metal
- D tin



2

If you hit a large rock with a hammer and break it into **hundreds of pieces**, the pieces would _____.

- A still be made of the same minerals
- B include some new and some old minerals
- C form new minerals
- D become different rocks

3

Minerals are _____.

- A living pieces of rock



4

Minerals come in **many** sizes, shapes, and colors which _____.

5



PREVIEW

Please [Sign In](#) or [Sign Up](#) to download the printable version of this worksheet

7

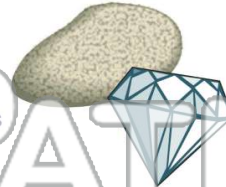
Factor tell you about a mineral.

- A how yellow a mineral is
- B how hard a mineral is
- C how shiny a mineral is
- D how soft a mineral is



How easily it can be scratched.

- A streak
- B color
- C luster
- D hardness



9

Streak color is a **physical** property of minerals, which refers to the color streak a mineral leaves when _____.

- A held
- B scratched against a surface
- C put in water
- D put in the sun



10

In the process of _____, bits of rocks, sand, soil, and dead matter are **moved** by the **wind**, **water**, and **gravity**.

- A erosion
- B precipitation
- C sedimentation
- D evaporation






Name _____ Class _____ Date _____

1 **Rocks** are made up of **many tiny pieces** of _____.

- A wood
- B minerals
- C metal
- D tin



2 If you hit a large rock with a hammer and break it into **hundreds of pieces**, the pieces would _____.

- A still be made of the same minerals
- B include some new and some old minerals
- C form new minerals
- D become different rocks

3 **Minerals** are _____.

- A living pieces of rock



4 **Minerals** come in **many** sizes, shapes, and colors which _____.

5



PREVIEW

Please [Sign In](#) or [Sign Up](#) to download the printable version of this worksheet

7

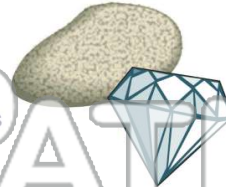
Factor tell you about a mineral.

- A how yellow a mineral is
- B how hard a mineral is
- C how shiny a mineral is
- D how soft a mineral is



how easily it can be scratched.

- A streak
- B color
- C luster
- D hardness



9 **Streak color** is a **physical** property of minerals, which refers to the color streak a mineral leaves when _____.

- A held
- B scratched against a surface
- C put in water
- D put in the sun



10 In the process of _____, bits of rocks, sand, soil, and dead matter are **moved** by the **wind**, **water**, and **gravity**.

- A erosion
- B precipitation
- C sedimentation
- D evaporation

