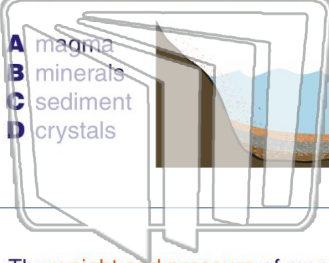




Name _____ Class _____ Date _____

1 All the **eroded materials** that eventually **settles** on land or at the bottom of a body of water are known as _____.

- A magma
- B minerals
- C sediment
- D crystals



2 Where do layers and layers of **sediment** often **pile up** on top of each other?

- A at the bottom of a body of water
- B in the atmosphere
- C on mountain top
- D in faults



3 The **weight and pressure** of many layers of sediment **forms sedimentary rock**. Since they form in **layers**, sedimentary

4 **Limestone** is a sedimentary rock made up of **hard skeletons and shells**. Which of these statements supports the sentence above?



PREVIEW

Please [Sign In](#) or [Sign Up](#) to download the printable version of this worksheet

7 **A** solid rock found on earth's surface
B solid rock found beneath the earth's surface
C melted rock found on top of earth's surface
D melted rock found beneath earth's surface



form _____ the earth.
A above
B above and below
C below
D under



9 When **magma** comes out of a volcano and **onto the earth's surface**, magma is then called _____.

- A lava
- B magma
- C sediment
- D molten rock



10 Once on the earth's surface, lava will cool quickly forming igneous rocks. Why **don't** these igneous rocks form **crystals**?

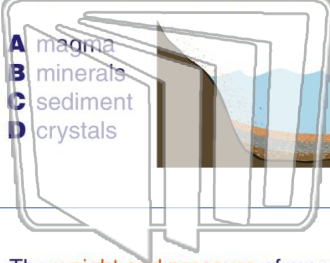
- A because the lava is above the surface
- B because they cool too slowly
- C because they cool too quickly
- D because lava cannot form crystals





Name _____ Class _____ Date _____

1 All the eroded materials that eventually settles on land or at the bottom of a body of water are known as _____



- A magma
- B minerals
- C sediment
- D crystals

2 Where do layers and layers of sediment often pile up on top of each other?

- A at the bottom of a body of water
- B in the atmosphere
- C on mountain top
- D in faults



3 The weight and pressure of many layers of sediment forms sedimentary rock. Since they form in layers, sedimentary

4 Limestone is a sedimentary rock made up of hard skeletons and shells. Which of these statements supports the sentence above?



PREVIEW

Please [Sign In](#) or [Sign Up](#) to download the printable version of this worksheet

7 _____ form _____ the earth.

- A solid rock found on earth's surface
- B solid rock found beneath the earth's surface
- C melted rock found on top of earth's surface
- D melted rock found beneath earth's surface

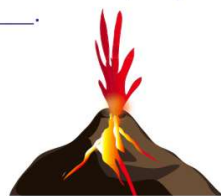


- A above
- B above and below
- C below
- D under



9 When magma comes out of a volcano and onto the earth's surface, magma is then called _____.

- A lava
- B magma
- C sediment
- D molten rock



10 Once on the earth's surface, lava will cool quickly forming igneous rocks. Why don't these igneous rocks form crystals?

- A because the lava is above the surface
- B because they cool too slowly
- C because they cool too quickly
- D because lava cannot form crystals

