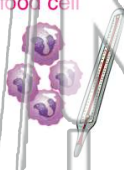




Name _____ Class _____ Date _____

1 **White blood cells** are produced in your body to fight off foreign and diseased cells. The worse the infection, the more white blood cells your body produces to fight the infection. So a raised white blood cell count indicates _____.

A a healthy body
 B someone is tired
 C an infection of the body
 D someone is hungry



2 Scientists moved from a Five Kingdom classification system to a Six Kingdom classification system. **They split the Monera group into two, eubacteria and archaeabacteria, because _____.**

A they are similar
 B they are different
 C all bacteria are the same
 D no bacteria is alike



3 _____ help **protect and preserve** living species that are in danger of becoming extinct.

4 Which of the following is an example of a **non-living component** of the ecosystem you live in?

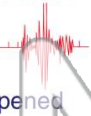


PREVIEW

Please [Sign In](#) or [Sign Up](#) to download the printable version of this worksheet

7 There has been a 4.3 earthquake in California. **What does the 4.3 refer to?**

A earthquake's measurement on Richter Scale
 B the time the earthquake happened
 C an address where it occurred
 D the number of earthquakes



8 **_____** masses of the earth. How many **continents** are on earth?

A 5
 B 6
 C 7
 D 8



9 The _____ was established to protect the **quality of drinking water** in the United States.

A Clean Water Act
 B Anti-Water Pollution Act
 C Clear Water Act
 D Safe Drinking Water Act



10 _____ is a **series of huge waves** that occur often because of an underwater disturbance, such as an earthquake or volcano eruption. A tsunami in 2004 affected many countries such as Sri Lanka, India, Indonesia and Thailand.

A wave C tsunami
 B tide D current



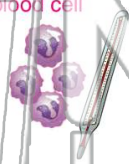


Name _____ Class _____ Date _____

1

White blood cells are produced in your body to fight off foreign and diseased cells. The worse the infection, the more white blood cells your body produces to fight the infection. So a raised white blood cell count indicates _____.

- A a healthy body
- B someone is tired
- C an infection of the body
- D someone is hungry



2

Scientists moved from a Five Kingdom classification system to a Six Kingdom classification system. They split the **Monera group** into two, eubacteria and archaeabacteria, because _____.

- A they are similar
- B they are different
- C all bacteria are the same
- D no bacteria is alike



3

_____ help **protect and preserve** living species that are in danger of becoming extinct.

4

Which of the following is an example of a **non-living component** of the ecosystem you live in?



PREVIEW

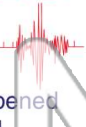
Please [Sign In](#) or [Sign Up](#) to download the printable version of this worksheet

5

7

There has been a 4.3 earthquake in California. What does the 4.3 refer to?

- A earthquake's measurement on Richter Scale
- B the time the earthquake happened
- C an address where it occurred
- D the number of earthquakes



_____ masses of the earth. How many continents are on earth?

- A 5
- B 6
- C 7
- D 8



9

The _____ was established to protect the **quality of drinking water** in the United States.

- A Clean Water Act
- B Anti-Water Pollution Act
- C Clear Water Act
- D Safe Drinking Water Act



10

_____ is a series of huge waves that occur often because of an underwater disturbance, such as an earthquake or volcano eruption. A tsunami in 2004 affected many countries such as Sri Lanka, India, Indonesia and Thailand.

- A wave
- B tide
- C tsunami
- D current

