



Name _____ Class _____ Date _____

1 Have you ever seen a meteor shower?
Meteors are small fragments of debris from space that enter the earth's atmosphere at extremely high speed. They then turn into a _____, leaving a streak of light that disappears quickly.

A vapor C solid
 B liquid D comet



2 You can tell the moon in this phase comes **before the full moon phase** and is **waxing** (meaning the visible area is getting larger) because the _____.

A moon rose in the east
 B moon looks round
 C visible surface is on the left side
 D visible surface is on the right side



3 You hear on the radio that a **high air pressure system** will be moving in tomorrow. **After hearing this news, which would most likely occur?**

4 Which item may be a good idea to bring with you if you hear that a **low air pressure system** is moving into



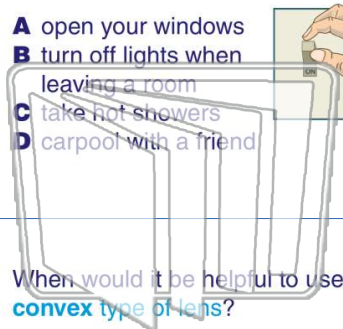
5

PREVIEW

Please [Sign In](#) or [Sign Up](#) to download the printable version of this worksheet

7 **Conserve electricity** in your house.

A open your windows
 B turn off lights when leaving a room
 C take hot showers
 D carpool with a friend



a **parallel circuit** instead of a simple circuit?

A If a bulb goes out, all will go out.
 B If a bulb goes out, the circuit will not work.
 C If a bulb goes out, others will stay lit.
 D Parallel circuits are safer.



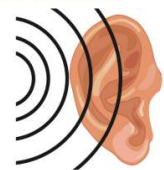
9 When would it be helpful to use a **convex type of lens**?

A to heat something quickly
 B to make something smaller
 C to magnify an object
 D to make a mirror



10 A _____ is an **electronic device** that is **implanted** during surgery into the **inner ear** and restores some hearing to the deaf.

A cochlear implant
 B sound implant
 C hearing implant
 D hearing aid





Name _____ Class _____ Date _____

1

Have you ever seen a meteor shower? **Meteors** are small fragments of debris from space that enter the earth's atmosphere at extremely high speed. They then turn into a _____, leaving a streak of light that disappears quickly.

- A vapor
- B liquid
- C solid
- D comet



2

You can tell the moon in this phase comes **before the full moon phase** and is **waxing** (meaning the visible area is getting larger) because the _____.

- A moon rose in the east
- B moon looks round
- C visible surface is on the left side
- D visible surface is on the right side



3

You hear on the radio that a **high air pressure system** will be moving in tomorrow. **After hearing this news, which would most likely occur?**

4

Which item may be a good idea to bring with you if you hear that a **low air pressure system** is moving into

5



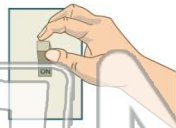
PREVIEW

Please [Sign In](#) or [Sign Up](#) to download the printable version of this worksheet

7

Conserve electricity in your house.

- A open your windows
- B turn off lights when leaving a room
- C take hot showers
- D carpool with a friend



10

a **parallel circuit** instead of a simple circuit?

- A If a bulb goes out, all will go out.
- B If a bulb goes out, the circuit will not work.
- C If a bulb goes out, others will stay lit.
- D Parallel circuits are safer.



9

When would it be helpful to use a **convex type of lens**?

- A to heat something quickly
- B to make something smaller
- C to magnify an object
- D to make a mirror



A _____ is an **electronic device** that is **implanted during surgery into the inner ear** and restores some hearing to the deaf.

- A cochlear implant
- B sound implant
- C hearing implant
- D hearing aid

