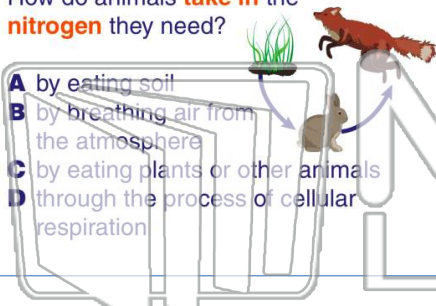




Name _____ Class _____ Date _____

1 How do animals **take in** the **nitrogen** they need?

- A by eating soil
- B by breathing air from the atmosphere
- C by eating plants or other animals
- D through the process of cellular respiration



2 The **decaying** of a dead **organism's body** is one way that _____.

- A nitrogen is removed from the soil
- B carbon dioxide is removed from the soil
- C nitrogen is returned to the soil
- D carbon dioxide is returned to the soil



3 _____ is a **heavy, colorless gas** that that only makes up $\frac{1}{100}$ of the Earth's atmosphere.

4 Oxygen makes up $\frac{2}{10}$ of the Earth's atmosphere. Carbon dioxide only makes up $\frac{1}{10}$ of the Earth's atmosphere. How




PREVIEW

Please [Sign In](#) or [Sign Up](#) to download the printable version of this worksheet

7 what is **released** into the atmosphere.

- A oxygen
- B helium gas
- C water
- D methane gas and carbon dioxide



8 _____ is a **poisonous gas** which forms about 20% of the Earth's atmosphere.

- A Carbon dioxide
- B Oxygen
- C Nitrogen
- D Helium



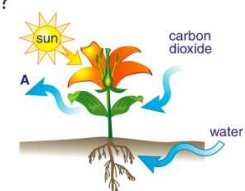
9 If a large number of plants and trees were taken out of an ecosystem, which gas would **decrease**?

- A oxygen
- B carbon dioxide
- C nitrogen
- D carbon



10 On this **photosynthesis** chart, what does **A** represent?

- A carbon dioxide
- B oxygen
- C nitrogen
- D helium





Name _____ Class _____ Date _____

1 How do animals **take in** the **nitrogen** they need?

A by eating soil
 B by breathing air from the atmosphere
 C by eating plants or other animals
 D through the process of cellular respiration

2 The **decaying** of a dead **organism's body** is one way that _____.

A nitrogen is removed from the soil
 B carbon dioxide is removed from the soil
 C nitrogen is returned to the soil
 D carbon dioxide is returned to the soil

3 _____ is a **heavy, colorless gas** that that only makes up $\frac{1}{100}$ of the Earth's atmosphere.

4 Oxygen makes up $\frac{2}{10}$ of the Earth's atmosphere. Carbon dioxide only makes up $\frac{1}{10}$ of the Earth's atmosphere. How

PREVIEW

Please [Sign In](#) or [Sign Up](#) to download the printable version of this worksheet

7 what is **released** into the atmosphere.

A oxygen
 B helium gas
 C water
 D methane gas and carbon dioxide

8 _____ is a **poisonous gas** which forms about 20% of the Earth's atmosphere.

A Carbon dioxide
 B Oxygen
 C Nitrogen
 D Helium

9 If a large number of plants and trees were taken out of an ecosystem, which gas would **decrease**?

A oxygen
 B carbon dioxide
 C nitrogen
 D carbon

10 On this **photosynthesis** chart, what does **A** represent?

A carbon dioxide
 B oxygen
 C nitrogen
 D helium