




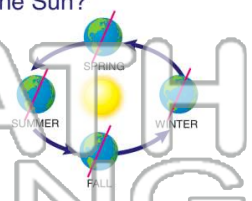
Name _____ Class _____ Date _____

1 What does the **quick rotation** of the Earth **every 24 hours** allow for?




A extreme temperatures on Earth
 B Earth to be suitable to live on
 C Earth to experience rainfall
 D Earth to have seasons

2 During which **season** in North America is the Northern Hemisphere tilted **nearest** to the Sun?



A winter
 B spring
 C summer
 D autumn

3 The air that surrounds the Earth is known as the Earth's **atmosphere**. What does the atmosphere do to make



4 What gas is the **atmosphere** mostly made up of?



5



PREVIEW

Please [Sign In](#) or [Sign Up](#) to download the printable version of this worksheet

7

Which of the following is a **cause** of **weather** occur?


A mesosphere
 B exosphere
 C stratosphere
 D troposphere



8

This **radiation** (known as UV rays), which is extremely harmful to us on Earth.

A radiation light
 B ultraviolet light
 C ultraradiant rays
 D violent rays




9 Which of the following is a **cause** of **air pollution**?

A bicycles
 B litter
 C car exhaust
 D hail



10 This **gas** is highly **poisonous** and can cause death. It can come from cars, gas stoves, water heaters, furnaces, and space heaters. People have detectors in their homes to protect themselves from leaks of this gas, called _____.


A nitrogen C carbon dioxide
 B oxygen D carbon monoxide





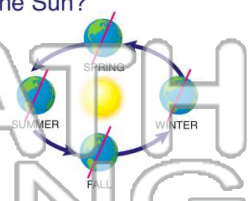
Name _____ Class _____ Date _____

1 What does the **quick rotation** of the Earth **every 24 hours** allow for?




A extreme temperatures on Earth
 B Earth to be suitable to live on
 C Earth to experience rainfall
 D Earth to have seasons

2 During which **season** in North America is the Northern Hemisphere tilted **nearest** to the Sun?



A winter
 B spring
 C summer
 D autumn

3 The air that surrounds the Earth is known as the Earth's **atmosphere**. What does the atmosphere do to make



4 What gas is the **atmosphere** mostly made up of?



5



PREVIEW

Please [Sign In](#) or [Sign Up](#) to download the printable version of this worksheet

7

Does all **weather** occur in the same layer of the atmosphere?

A mesosphere
 B exosphere
 C stratosphere
 D troposphere



8

Which of the following is a **cause** of **air pollution**?

A bicycles
 B litter
 C car exhaust
 D hail



9

Which of the following is a **cause** of **air pollution**?

A bicycles
 B litter
 C car exhaust
 D hail



10

This **gas** is highly **poisonous** and can cause death. It can come from cars, gas stoves, water heaters, furnaces, and space heaters. People have detectors in their homes to protect themselves from leaks of this gas, called _____.

A nitrogen
 B oxygen
 C carbon dioxide
 D carbon monoxide

