



Name _____ Class _____ Date _____

1

Which of the following statements supports the fact that people use **oceans** as a **natural resource** for certain products?

- A Many people drink eight glasses of water daily.
- B Many people enjoy eating tuna fish.
- C Many people eat chicken as a source of protein.
- D Many people drink milk as a source of calcium.



2

Atlantic, Pacific, Indian, Southern, and Arctic are all names of _____.

- A rivers
- B lakes
- C oceans
- D bays



3

Which of the following occurs because of **ocean tides** and _____?



4

Which statement is true of **ocean currents**?



A They cause tides to _____.

5



PREVIEW

Please [Sign In](#) or [Sign Up](#) to download the printable version of this worksheet

7

_____ in the oceans.

- A soil on Earth
- B water on Earth
- C continents of Earth
- D the Sun



occur in the oceans. What else does the **gravitational interaction** cause?

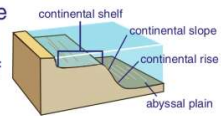
- A keeps the Moon in orbit around the Earth
- B causes the stars to come out at night
- C allows the weather to be warm on Earth
- D causes Earth to be suitable for living



9

Imagine you just ran into the ocean and the water is up to your waist. On what **part of land** within the ocean are you standing upon?

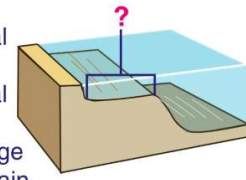
- A the continental slope
- B the continental rise
- C the continental shelf
- D the abyssal plain



10

Which **area of the ocean** is marked with a **?** on the diagram below?

- A the continental slope
- B the continental shelf
- C mid-ocean ridge
- D the abyssal plain





Name _____ Class _____ Date _____

1 Which of the following statements supports the fact that people use **oceans** as a **natural resource** for certain products?

- A Many people drink eight glasses of water daily.
- B Many people enjoy eating tuna fish.
- C Many people eat chicken as a source of protein.
- D Many people drink milk as a source of calcium.



2 **Atlantic, Pacific, Indian, Southern, and Arctic** are all names of _____.

- A rivers
- B lakes
- C oceans
- D bays



3 Which of the following occurs because of **ocean tides** and



4 Which statement is true of **ocean currents**?



A They cause tides to



PREVIEW

Please [Sign In](#) or [Sign Up](#) to download the printable version of this worksheet

7 **_____** in the oceans.

- A soil on Earth
- B water on Earth
- C continents of Earth
- D the Sun



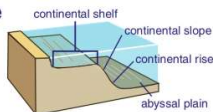
occur in the oceans. **What else does the gravitational interaction cause?**

- A keeps the Moon in orbit around the Earth
- B causes the stars to come out at night
- C allows the weather to be warm on Earth
- D causes Earth to be suitable for living



9 Imagine you just ran into the ocean and the water is up to your waist. On what **part of land** within the ocean are you standing upon?

- A the continental slope
- B the continental rise
- C the continental shelf
- D the abyssal plain



10 Which **area of the ocean** is marked with a **?** on the diagram below?

- A the continental slope
- B the continental shelf
- C mid-ocean ridge
- D the abyssal plain

