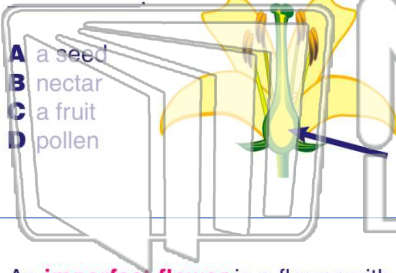




Name _____ Class _____ Date _____

1 The **ovary** of a flower contains seeds.
The **ovary** of a plant becomes



- A a seed
- B nectar
- C a fruit
- D pollen

2 A **perfect flower** is a flower with _____.



- A a stamen and a pistil
- B a stamen
- C a pistil
- D neither a stamen nor a pistil

3 An **imperfect flower** is a flower with _____.



4 What **type of flower** is shown below?



- A a nonvascular flower



PREVIEW

Please [Sign In](#) or [Sign Up](#) to download the printable version of this worksheet

7 one flower to the _____ of another flower.

- A sepal
- B filament
- C anther
- D stigma




8 The pollen makes it to the egg cells in the ovary of a flower?

- A travel through the filaments
- B travel down the sepals
- C travel down pollen tubes
- D travel through the flower's stem

9 What does the following diagram show?

- A the stamen of a flower
- B the pistil of a flower
- C germination of a seed
- D seed dispersal



10 The **sperm cells** from the pollen go from the stigma, down the **style** through the **pollen tubes**, to the _____ of the flower.

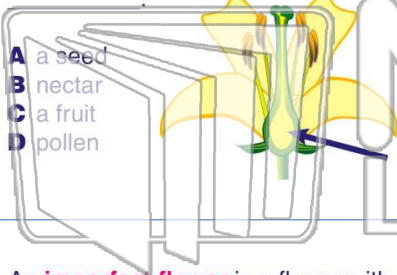
- A ovary
- B sepals
- C anthers
- D petals





Name _____ Class _____ Date _____

1 The **ovary** of a flower contains seeds. The **ovary** of a plant becomes _____.



- A a seed
- B nectar
- C a fruit
- D pollen

2 A **perfect flower** is a flower with _____.



- A a stamen and a pistil
- B a stamen
- C a pistil
- D neither a stamen nor a pistil

3 An **imperfect flower** is a flower with _____.



4 What **type of flower** is shown below?



- A a nonvascular flower



PREVIEW

Please [Sign In](#) or [Sign Up](#) to download the printable version of this worksheet

7 one flower to the _____ of another flower.

- A sepal
- B filament
- C anther
- D stigma




8 The pollen makes it to the egg cells in the ovary of a flower?

- A travel through the filaments
- B travel down the sepals
- C travel down pollen tubes
- D travel through the flower's stem

9 What does the following diagram show?

- A the stamen of a flower
- B the pistil of a flower
- C germination of a seed
- D seed dispersal



10 The **sperm cells** from the pollen go from the stigma, down the **style** through the **pollen tubes**, to the _____ of the flower.

- A ovary
- B sepals
- C anthers
- D petals

