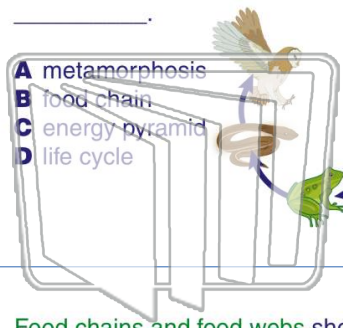




Name _____ Class _____ Date _____

1 The following picture represents a(n) _____.



- A metamorphosis
- B food chain
- C energy pyramid
- D life cycle

2 Which organism in this food chain is **not a consumer**?

- A the owl
- B the grasshopper
- C the grass
- D the mouse

3 Food chains and food webs show the **flow** of _____ within an ecosystem.

4 Which organism in this food chain is taking in the **least amount of energy**?

5



PREVIEW

Please [Sign In](#) or [Sign Up](#) to download the printable version of this worksheet

7 _____ have the **largest population** in an ecosystem?

- A omnivores
- B decomposers
- C consumers
- D producers



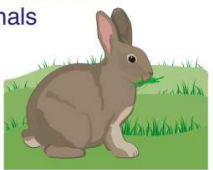
_____ would cause **competition** and a _____ for some organisms.

- A lack of oxygen
- B surplus of oxygen
- C lack of food
- D surplus of food



9 What does an **herbivore** eat?

- A plants and other animals
- B only dead animals
- C only plants
- D only other live animals



10 **Carnivores** do **not** eat _____ directly.

- A plants
- B other animals
- C insects
- D animal meat

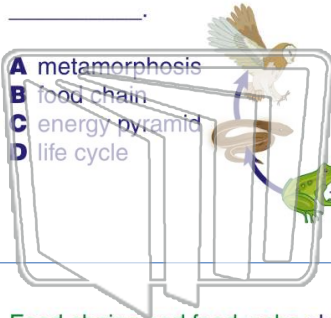




Name _____ Class _____ Date _____

1 The following picture represents a(n) _____.

- A metamorphosis
- B food chain
- C energy pyramid
- D life cycle



2 Which organism in this food chain is **not a consumer**?

- A the owl
- B the grasshopper
- C the grass
- D the mouse



3 Food chains and food webs show the **flow** of _____ within an ecosystem.

4 Which organism in this food chain is taking in the **least amount of energy**?

PREVIEW

Please [Sign In](#) or [Sign Up](#) to download the printable version of this worksheet


7 _____ have the **largest population** in an ecosystem?

- A omnivores
- B decomposers
- C consumers
- D producers



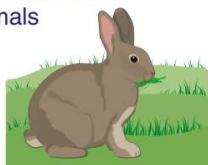
8 _____ would cause **competition** and a _____ for some organisms.

- A lack of oxygen
- B surplus of oxygen
- C lack of food
- D surplus of food



9 What does an **herbivore** eat?

- A plants and other animals
- B only dead animals
- C only plants
- D only other live animals



10 **Carnivores** do **not** eat _____ directly.

- A plants
- B other animals
- C insects
- D animal meat

