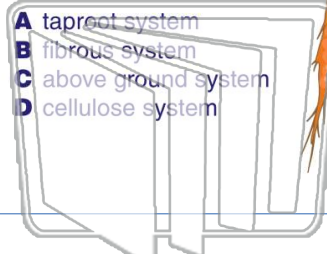




Name _____ Class _____ Date _____

1 What type of **root system** is pictured below?



- A taproot system
- B fibrous system
- C above ground system
- D cellulose system

2 Kara pulled a plant from the soil and noticed that the plant had **many roots** shooting out in **many directions**. What type of root system was Kara observing?



- A taproot system
- B fibrous system
- C above ground system
- D cellulose system

3 What would happen to a plant if it **did not have roots** during a windstorm?

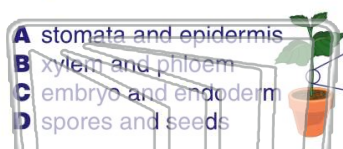
4 Which is a **function** of some plant's **roots**?



PREVIEW


Please [Sign In](#) or [Sign Up](#) to download the printable version of this worksheet

7 parts of the plant **through the tissues in the plant**, which are known as _____.



- A stomata and epidermis
- B xylem and phloem
- C embryo and endoderm
- D spores and seeds

8 carry food, water, and nutrients all throughout the plant.



- A Composite
- B Unicellular
- C Vascular
- D Cellular

9 What structure of a plant carries water and nutrients **upward from roots to other parts of a plant**?



- A chloroplast
- B epidermis
- C phloem
- D xylem

10 What structure of a plant carries sugar **away from leaves** to the rest of the plant?

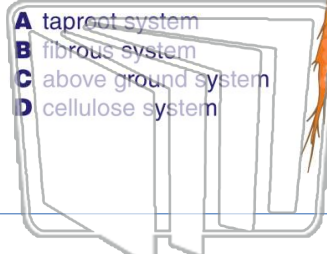


- A phloem
- B xylem
- C pistil
- D stamen



Name _____ Class _____ Date _____

1 What type of **root system** is pictured below?



- A taproot system
- B fibrous system
- C above ground system
- D cellulose system

2 Kara pulled a plant from the soil and noticed that the plant had **many roots** shooting out in **many directions**. What type of root system was Kara observing?



- A taproot system
- B fibrous system
- C above ground system
- D cellulose system

3 What would happen to a plant if it **did not have roots** during a windstorm?

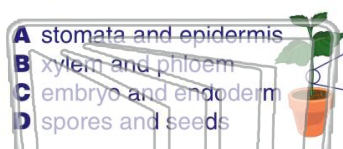
4 Which is a **function** of some plant's **roots**?



PREVIEW

Please [Sign In](#) or [Sign Up](#) to download the printable version of this worksheet

7 parts of the plant **through the tissues** in the plant, which are known as _____.



- A stomata and epidermis
- B xylem and phloem
- C embryo and endoderm
- D spores and seeds

8 carry food, water, and nutrients all throughout the plant.



- A Composite
- B Unicellular
- C Vascular
- D Cellular

9 What structure of a plant carries water and nutrients **upward** from roots to other parts of a plant?



- A chloroplast
- B epidermis
- C phloem
- D xylem

10 What structure of a plant carries sugar **away from leaves** to the rest of the plant?



- A phloem
- B xylem
- C pistil
- D stamen