

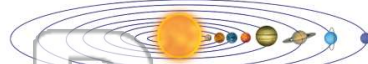


Name _____ Class _____ Date _____

- 1 Which defines the word **planet**?
- A a large body that revolves around the Moon
 - B a large body that is suitable for life
 - C a large body that contains water and land
 - D a large body that revolves around the Sun



- 2 What is true of **all planets**?
- A all rotate at the same speed
 - B all rotate and revolve around the Sun
 - C all have their own moons
 - D all rotate and revolve around the Moon



- 3 This illustration shows the planets in their correct order from the Sun. Which planet is the **largest**?

- 4 This planet is the **closest** planet to the Sun. It is also the **smallest** planet in the solar system. Which planet is being



PREVIEW

Please [Sign In](#) or [Sign Up](#) to download the printable version of this worksheet

- 7
- Solar system that can support life.
- A Venus
 - B Mercury
 - C Earth
 - D Mars




- Sun and has a **thin atmosphere**, which is made up of mostly of **carbon dioxide**.
- A Venus
 - B Jupiter
 - C Mercury
 - D Mars



- 9 **Mars** is nicknamed the "**red planet**." What gives Mars its red appearance?
- A the reflection of sunlight
 - B the iron in its surface
 - C the reflection of its moon's light
 - D the copper in its surface



- 10 Which of these are known as the **inner planets**?
- A Mercury, Venus, Earth, Mars
 - B Jupiter, Saturn, Uranus, Neptune
 - C Saturn, Uranus, Neptune, Pluto
 - D Venus, Earth, Mars, and Jupiter





Name _____ Class _____ Date _____

1

Which defines the word **planet**?

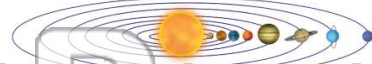
- A a large body that revolves around the Moon
- B a large body that is suitable for life
- C a large body that contains water and land
- D a large body that revolves around the Sun



2

What is true of **all planets**?

- A all rotate at the same speed
- B all rotate and revolve around the Sun
- C all have their own moons
- D all rotate and revolve around the Moon




3

This illustration shows the planets in their correct order from the Sun. Which planet is the **largest**?

4

This planet is the **closest** planet to the Sun. It is also the **smallest** planet in the solar system. Which planet is being

5



PREVIEW

Please [Sign In](#) or [Sign Up](#) to download the printable version of this worksheet

7

Solar system that can support life.

- A Venus
- B Mercury
- C Earth
- D Mars



Sun and has a **thin atmosphere**, which is made up of mostly of **carbon dioxide**.

- A Venus
- B Jupiter
- C Mercury
- D Mars



9

Mars is nicknamed the "**red planet**." What gives Mars its red appearance?

- A the reflection of sunlight
- B the iron in its surface
- C the reflection of its moon's light
- D the copper in its surface



10

Which of these are known as the **inner planets**?

- A Mercury, Venus, Earth, Mars
- B Jupiter, Saturn, Uranus, Neptune
- C Saturn, Uranus, Neptune, Pluto
- D Venus, Earth, Mars, and Jupiter

