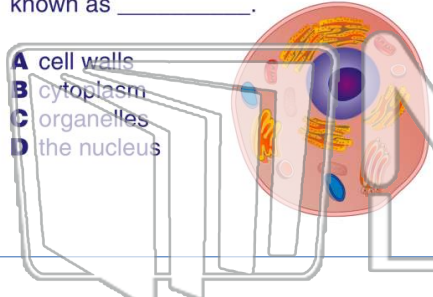




Name _____ Class _____ Date _____

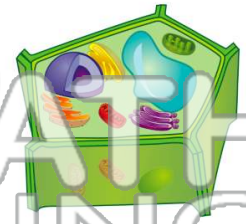
1 The **structures** that are **within a cell** are known as _____.

- A cell walls
- B cytoplasm
- C organelles
- D the nucleus

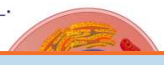


2 All _____ cells have a **cell wall**.

- A plant
- B animal
- C bacteria
- D protist



3 The **outer layer** of an animal cell is called the _____.



4 The **cell membrane** contains **pores** that allow materials in and out of the cell.

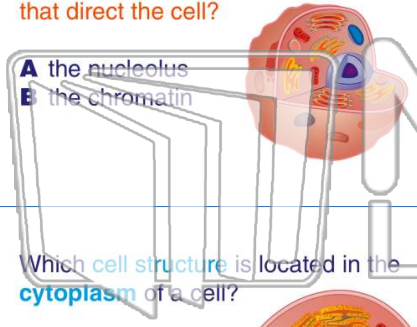


PREVIEW

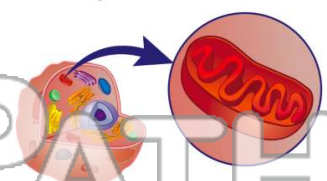
Please [Sign In](#) or [Sign Up](#) to download the printable version of this worksheet

7 Which structure has the **instructions** that direct the cell?

- A the nucleolus
- B the chromatin

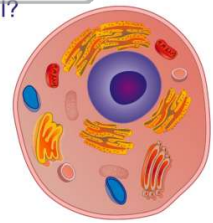


- A all
- B most
- C some
- D none



9 Which **cell structure** is located in the **cytoplasm** of a cell?

- A cell wall
- B cell membrane
- C ribosomes
- D pore



10 Which **organelles** in the **cytoplasm** are known as the **storage compartments**?

- A Golgi bodies
- B vacuoles
- C endoplasmic reticulum
- D lysosomes

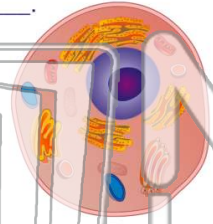




Name _____ Class _____ Date _____

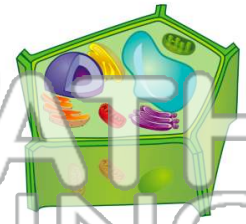
1 The **structures** that are **within a cell** are known as _____.

- A cell walls
- B cytoplasm
- C organelles
- D the nucleus



2 All _____ cells have a **cell wall**.

- A plant
- B animal
- C bacteria
- D protist



3 The **outer layer** of an animal cell is called the _____.

4 The **cell membrane** contains **pores** that allow materials in and out of the cell.



PREVIEW

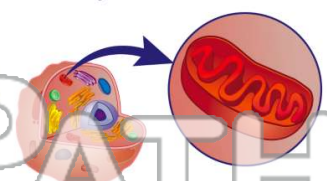
Please [Sign In](#) or [Sign Up](#) to download the printable version of this worksheet

7 Which structure has the **instructions** that direct the cell?

- A the nucleolus
- B the chromatin

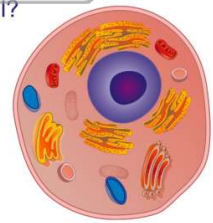


- A all
- B most
- C some
- D none



9 Which **cell structure** is located in the **cytoplasm** of a cell?

- A cell wall
- B cell membrane
- C ribosomes
- D pore



10 Which **organelles** in the **cytoplasm** are known as the **storage compartments**?

- A Golgi bodies
- B vacuoles
- C endoplasmic reticulum
- D lysosomes

