



Name \_\_\_\_\_ Class \_\_\_\_\_ Date \_\_\_\_\_

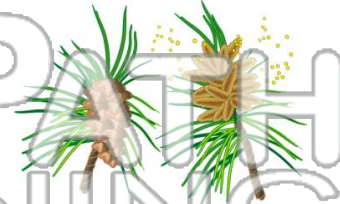
1 A **gymnosperm** produces \_\_\_\_\_ as reproductive structures.

- A leaves
- B flowers
- C cones
- D stems



2 A gymnosperm's cones are **only** female reproductive structures.

- A true
- B false



3 In plants, what are the cells called **before** they become **sperm cells**?

4 Reproduction **begins** with **gymnosperms** when the



## PREVIEW

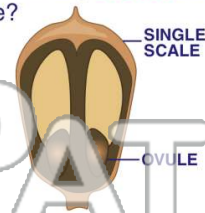
Please [Sign In](#) or [Sign Up](#) to download the printable version of this worksheet

7 A roots  
B branch  
C leaves  
D root cap



scale have?

- A 1
- B 2
- C 3
- D 4



9 Once attached on the scale of a cone, what grows out of the **pollen grain**?

- A more pollen
- B another sperm cell
- C a pollen tube
- D a seed



10 What is a **pollen tube** used for?

- A to send food into the ovule
- B to give the ovule more air
- C to drain the ovule
- D to send sperm cells into the ovule





Name \_\_\_\_\_ Class \_\_\_\_\_ Date \_\_\_\_\_

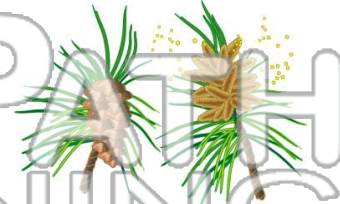
1 A **gymnosperm** produces \_\_\_\_\_ as reproductive structures.

- A leaves
- B flowers
- C cones
- D stems



2 A gymnosperm's cones are **only** female reproductive structures.

- A true
- B false



3 In plants, what are the cells called **before** they become **sperm cells**?

4 Reproduction **begins** with **gymnosperms** when the





## PREVIEW

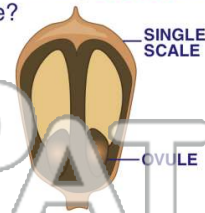
Please [Sign In](#) or [Sign Up](#) to download the printable version of this worksheet

7 A roots  
B branch  
C leaves  
D root cap



scale have?

- A 1
- B 2
- C 3
- D 4



9 Once attached on the scale of a cone, what grows out of the **pollen grain**?

- A more pollen
- B another sperm cell
- C a pollen tube
- D a seed



10 What is a **pollen tube** used for?

- A to send food into the ovule
- B to give the ovule more air
- C to drain the ovule
- D to send sperm cells into the ovule

