



Name _____ Class _____ Date _____


1 When a liquid becomes cooler, its particles move more _____ and it becomes _____

- A quickly, denser
- B slowly, denser
- C quickly, less dense
- D slowly, less dense



2 Hot mantle near the core can slowly rise and become cooler and denser.

True or False?
True
False



3 Which of the following information was *not* used to support the theory of continental drift proposed in the early 1900s?



4 About 180 million years ago, a large continental landmass split into two parts, called _____.

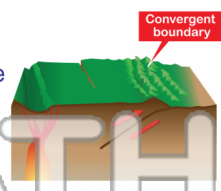


5
PREVIEW
Please [Sign In](#) or [Sign Up](#) to download the printable version of this worksheet

7
A an oceanic plate is subducted below a continental plate.
B two tectonic plates move away from each other.
C two continental plates slide past each other.
D two tectonic plates move toward each other.

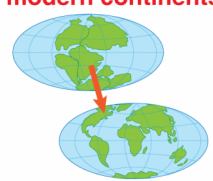


- A a fault
- B a mid-ocean ridge
- C a mountain range
- D a volcanic island



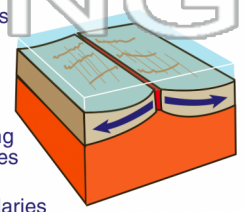
9 Approximately _____ years ago, two large landmasses broke apart and began forming the modern continents.

- A 300 million
- B 180 million
- C 65 million
- D 5 million



10 New oceanic crust is formed by _____.

- A earthquakes at transform faults
- B sea-floor spreading at mid-ocean ridges
- C volcanoes at convergent boundaries
- D magnetic reversals on the ocean floor





Name _____ Class _____ Date _____

1 When a liquid becomes cooler, its particles move more _____ and it becomes _____

- A quickly, denser
- B slowly, denser
- C quickly, less dense
- D slowly, less dense



2 Hot mantle near the core can slowly rise and become cooler and denser.

True or False?

- True
- False



3 Which of the following information was *not* used to support the theory of continental drift proposed in the early 1900s?

4 About 180 million years ago, a large continental landmass split into two parts, called _____.



PREVIEW

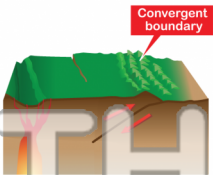
Please [Sign In](#) or [Sign Up](#) to download the printable version of this worksheet

7 an oceanic plate is subducted below a continental plate.



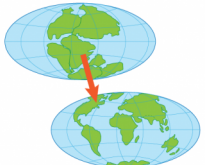
- B two tectonic plates move away from each other.
- C two continental plates slide past each other.
- D two tectonic plates move toward each other.

- A a fault
- B a mid-ocean ridge
- C a mountain range
- D a volcanic island



9 Approximately _____ years ago, two large landmasses broke apart and began forming the modern continents.

- A 300 million
- B 180 million
- C 65 million
- D 5 million



10 New oceanic crust is formed by _____.

- A earthquakes at transform faults
- B sea-floor spreading at mid-ocean ridges
- C volcanoes at convergent boundaries
- D magnetic reversals on the ocean floor

