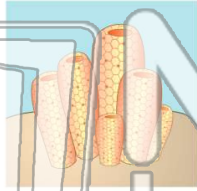




Name _____ Class _____ Date _____

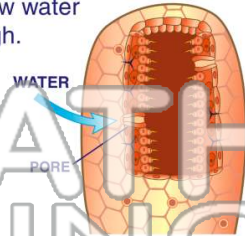
1 **Sponges** are considered to be **animals** because they _____.

- A move around their environment
- B are multicellular
- C are heterotrophic
- D have a mouth



2 In a sponge's body, **pores** are tiny holes that allow water to pass through.

- A true
- B false



3 What absorbs the tiny **food** particles that pass through the pores of a sponge?

4 Where are the **collar cells** located on the body of a sponge?



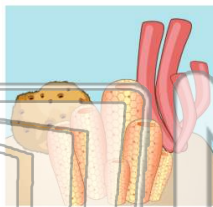
5

PREVIEW

Please [Sign In](#) or [Sign Up](#) to download the printable version of this worksheet

7 different from an adult sponge, known as a(n) _____.

- A budding
- B conjugation
- C mating
- D reproducing

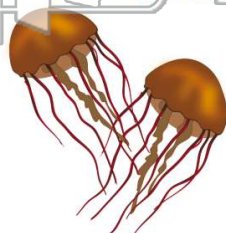


- A cnidarian
- B larva
- C infant
- D child



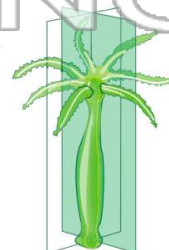
9 Which is an example of a **cnidarian**?

- A hydra
- B flatworm
- C sponge
- D planarian



10 All cnidarians have **bilateral symmetry**.

- A true
- B false

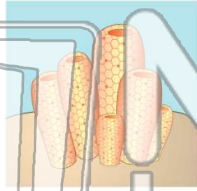




Name _____ Class _____ Date _____

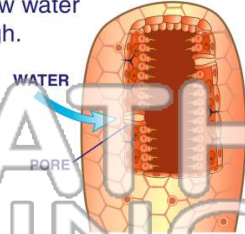
1 **Sponges** are considered to be **animals** because they _____.

- A move around their environment
- B are multicellular
- C are heterotrophic
- D have a mouth



2 In a sponge's body, **pores** are tiny holes that allow water to pass through.

- A true
- B false



3 What absorbs the tiny **food** particles that pass through the pores of a sponge?

4 Where are the **collar cells** located on the body of a sponge?

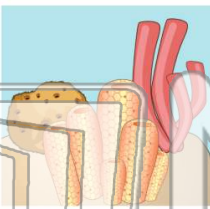




PREVIEW

Please [Sign In](#) or [Sign Up](#) to download the printable version of this worksheet

7 **A** budding
B conjugation
C mating
D reproducing



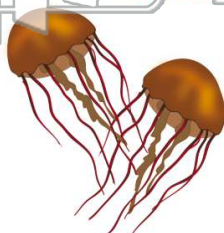
different from an adult sponge, known as a(n) _____.

- A cnidarian
- B larva
- C infant
- D child



9 Which is an example of a **cnidarian**?

- A hydra
- B flatworm
- C sponge
- D planarian



10 All cnidarians have **bilateral symmetry**.

- A true
- B false

