



Name _____ Class _____ Date _____

1 Almost $\frac{3}{4}$ of the earth is covered by water. Most of this water lies in our vast oceans and large lakes. Lake water usually lacks the salt that ocean waters have. Since the salt in the ocean cannot be seen, salt water is a _____.

A compound
 B suspension
 C heterogeneous mixture
 D homogeneous mixture



2 Orange juice can be purchased with or without pulp in it. The pulp in orange juice settles to the bottom because _____.

A orange juice is a suspension
 B there is too much juice with the pulp
 C the pulp is the wrong color
 D orange juice is a compound



3 Solutions are mixtures made up of both solutes and solvents. Which of the phrases below about solutions is correct?

4 What can be done to increase the concentration of a solution?



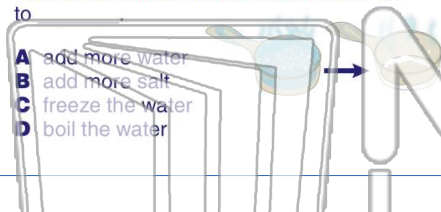
5

PREVIEW

Please [Sign In](#) or [Sign Up](#) to download the printable version of this worksheet

7 could be removed easily, this would solve the problem. One method that can be used to remove the salt from salt water would be to _____.

A add more water
 B add more salt
 C freeze the water
 D boil the water



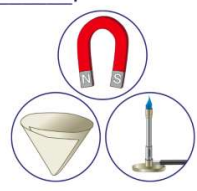
8

A milk is a single substance
 B milk particles refract light
 C milk has fat in it
 D milk has particles that do not settle



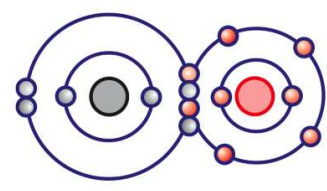
9 An effective way to remove iron filings from a mixture of iron filings and sawdust would be to _____.

A use filter paper
 B use a magnet
 C melt the mixture
 D freeze the mixture



10 On the list below, which substance is a compound?

A CO
 B C
 C He
 D Cu





Name _____ Class _____ Date _____

1 Almost $\frac{3}{4}$ of the earth is covered by water. Most of this water lies in our vast oceans and large lakes. Lake water usually lacks the salt that ocean waters have. Since the salt in the ocean cannot be seen, salt water is a _____.

A compound
 B suspension
 C heterogeneous mixture
 D homogeneous mixture



2 Orange juice can be purchased with or without pulp in it. The pulp in orange juice settles to the bottom because _____.

A orange juice is a suspension
 B there is too much juice with the pulp
 C the pulp is the wrong color
 D orange juice is a compound



3 Solutions are mixtures made up of both solutes and solvents. Which of the phrases below about solutions is correct?

4 What can be done to increase the concentration of a solution?



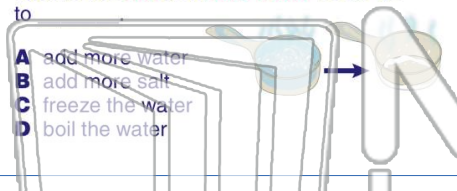


PREVIEW

Please [Sign In](#) or [Sign Up](#) to download the printable version of this worksheet

7 could be removed easily, this would solve the problem. One method that can be used to remove the salt from salt water would be to _____.

A add more water
 B add more salt
 C freeze the water
 D boil the water

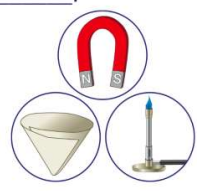


8 milk is a single substance
 milk particles refract light
 milk has fat in it
 milk has particles that do not settle



9 An effective way to remove iron filings from a mixture of iron filings and sawdust would be to _____.

A use filter paper
 B use a magnet
 C melt the mixture
 D freeze the mixture



10 On the list below, which substance is a compound?

A CO
 B C
 C He
 D Cu

