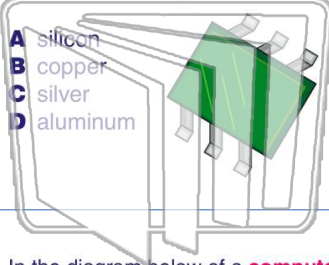




Name _____ Class _____ Date _____

1

A microchip is usually made with a **semiconductor**. Which of the elements listed below is a **good semiconductor**?



- A silicon
- B copper
- C silver
- D aluminum

2

A **material** is called a **semiconductor** if it _____.

- A does not conduct current
- B conducts current only under particular conditions
- C conducts current regardless of conditions
- D conducts current to only one half of the circuit

3

In the diagram below of a **computer system**, which part is considered to be the **"brain"** of the unit?

4

The **digital instructions** for a computer system are referred to as _____.

5

PREVIEW

Please [Sign In](#) or [Sign Up](#) to download the printable version of this worksheet

7

that they _____.

- A interfere with bird migration
- B disrupt the weather
- C cause illness in pets
- D cause poor cell phone reception

- A hard drive
- B CD-ROM
- C flash drive
- D RAM



9

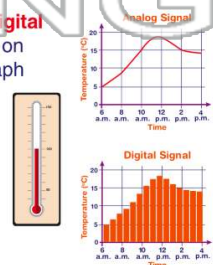
Almost all **technological** products are considered to be a type of _____.

- A artificial intelligence
- B information
- C system
- D computer

10

These graphs compare **digital** signals to **analog** signals on thermometers. Which graph represents the change in temperature shown by a mercury **thermometer**?

- A digital
- B analog
- C both
- D neither

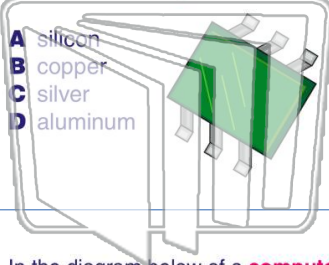




Name _____ Class _____ Date _____

1

A microchip is usually made with a **semiconductor**. Which of the elements listed below is a **good semiconductor**?



2

A **material** is called a **semiconductor** if it _____.

- A does not conduct current
- B conducts current only under particular conditions
- C conducts current regardless of conditions
- D conducts current to only one half of the circuit

3

In the diagram below of a **computer system**, which part is considered to be the **"brain"** of the unit?

4

The **digital instructions** for a computer system are referred to as _____.

5

PREVIEW

Please [Sign In](#) or [Sign Up](#) to download the printable version of this worksheet

7

that they _____.

- A interfere with bird migration
- B disrupt the weather
- C cause illness in pets
- D cause poor cell phone reception

- A hard drive
- B CD-ROM
- C flash drive
- D RAM

9

Almost all **technological** products are considered to be a type of _____.

- A artificial intelligence
- B information
- C system
- D computer

10

These graphs compare **digital** signals to **analog** signals on thermometers. Which graph represents the change in temperature shown by a mercury **thermometer**?

- A digital
- B analog
- C both
- D neither

