



Sun-Earth-Moon System

Sci
F

Name _____ Class _____ Date _____

- 1 Fill-in the answer.
The **spinning motion** of the Earth on its **axis** is called _____.




- 6 The **revolution** of the Moon around the Earth makes it appear different to us throughout the month. The **different appearances** of the Moon are known as the Moon's _____.




- 2 The **period of revolution** of the Earth is _____. Circle the answer letter.

- a. 1 day
b. 365 days
c. 30 days



- 7 When the **portion of the Moon** that is lit by sunlight is **getting larger**, the Moon is said to be _____.



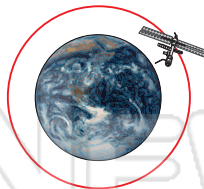
- 3 Get to know the different subjects in school. Circle the subjects that you like to study.



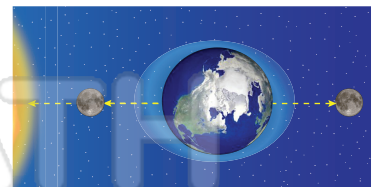
PREVIEW

Please [Sign In](#) or [Sign Up](#) to download the printable version of this worksheet

- 4 A natural **celestial body** that **travels around another celestial body** is known as a(n) _____.



pull on the oceans is at its maximum, and the **tidal range** is at its highest. What are these **unusually high tides** called?



- 5 Name the **first human** to step on the Moon.



- 10 The **space mission** that landed **men on the Moon** and brought them back safely to Earth was _____.

Apollo _____.





Sun-Earth-Moon System - Answer Key

Sci
F

Name _____ Class _____ Date _____

1 Fill-in the answer.

The **spinning motion** of the Earth on its **axis** is called

rotation.




6 The **revolution** of the Moon around the Earth makes it appear different to us throughout the month. The **different appearances** of the Moon are known as the Moon's _____.




eclipses phases waning

2 The **period of revolution** of the Earth is _____. Circle the answer letter.

- a. 1 day
- b. 365 days
- c. 30 days



7 When the **portion of the Moon** that is lit by sunlight is **getting larger**, the Moon is said to be



waxing

3 Get to know the different subjects in school. Circle the correct answer.

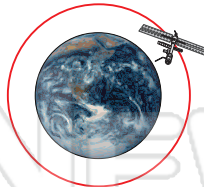


PREVIEW

Please [Sign In](#) or [Sign Up](#) to download the printable version of this worksheet

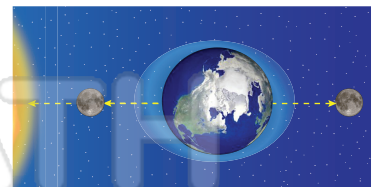
4 A natural **celestial body** that **travels around another celestial body** is known as a(n)

satellite.



pull on the oceans is at its maximum, and the **tidal range** is at its **highest**. What are these **unusually high tides** called?

spring tides



5 Name the **first human** to **step on the Moon**.

Neil Armstrong



10 The **space mission** that landed **men on the Moon** and brought them back safely to Earth was

Apollo 11.

