

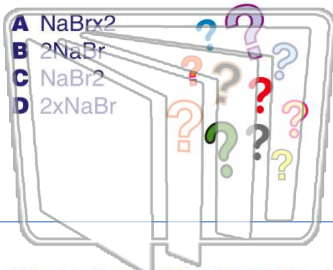


Name \_\_\_\_\_ Class \_\_\_\_\_ Date \_\_\_\_\_

1

What is the **correct** formula for **two** molecules of sodium bromide?

- A NaBr<sub>2</sub>
- B 2NaBr
- C NaBr<sub>2</sub>
- D 2xNaBr



2

How many **atoms** are there in **two molecules** of the compound shown below?

- A 4
- B 1
- C 8
- D 2



NEW PATH  
LEARNING

3

What is the **molecular mass** of the compound shown below?

\_\_\_\_\_

4

The **name** of the compound shown below is \_\_\_\_\_.

8

5



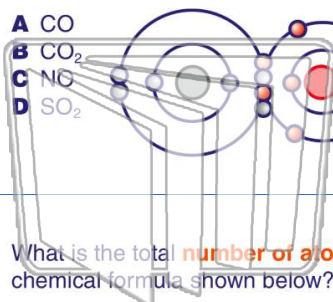
## PREVIEW

Please [Sign In](#) or [Sign Up](#) to download the printable version of this worksheet

7

gas **carbon monoxide**?

- A CO
- B CO<sub>2</sub>
- C NO
- D SO<sub>2</sub>



correct name for the compound **Na<sub>2</sub>CO<sub>3</sub>**?

- A sodium carbon dioxide
- B sodium carbonate
- C sodium oxide
- D potassium carbonate

NEW PATH  
LEARNING

9

What is the total **number of atoms** in the chemical formula shown below?

- A 17
- B 15
- C 10
- D 5



10

How many atoms of **oxygen (O)** are in the **chemical formula** below?

- A 4
- B 5
- C 7
- D 12

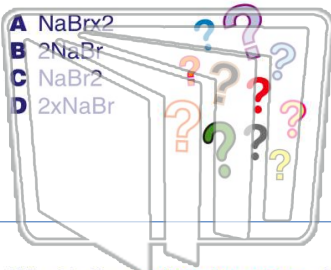




Name \_\_\_\_\_ Class \_\_\_\_\_ Date \_\_\_\_\_

1 What is the **correct** formula for **two** molecules of sodium bromide?

- A NaBr<sub>2</sub>
- B 2NaBr
- C NaBr<sub>2</sub>
- D 2xNaBr



2 How many **atoms** are there in **two molecules** of the compound shown below?

- A 4
- B 1
- C 8
- D 2



NEW PATH LEARNING

3 What is the **molecular mass** of the compound shown below?

4 The **name** of the compound shown below is \_\_\_\_\_.

8



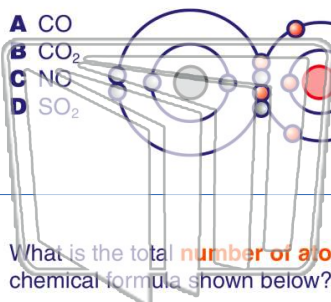
5

**PREVIEW**

Please [Sign In](#) or [Sign Up](#) to download the printable version of this worksheet

7 What is the **correct** name for the gas **carbon monoxide**?

- A CO
- B CO<sub>2</sub>
- C NO
- D SO<sub>2</sub>



8 What is the **correct** name for the compound **Na<sub>2</sub>CO<sub>3</sub>**?

- A sodium carbon dioxide
- B sodium carbonate
- C sodium oxide
- D potassium carbonate

9 What is the total **number of atoms** in the chemical formula shown below?

- A 17
- B 15
- C 10
- D 5



10 How many atoms of **oxygen (O)** are in the **chemical formula** below?

- A 4
- B 5
- C 7
- D 12

