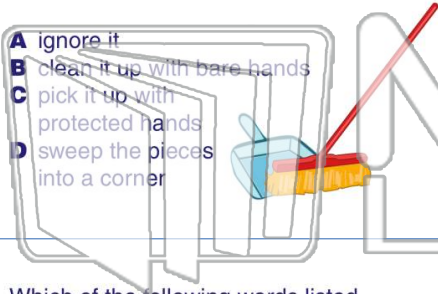




Name _____ Class _____ Date _____

1 When cleaning up a **broken glass beaker**, a student should _____.

- A ignore it
- B clean it up with bare hands
- C pick it up with protected hands
- D sweep the pieces into a corner



2 Using this data table, estimate the **height** of a plant if **320 grams** of fertilizer were used to grow it.

Height of Plant (centimeters)	10	15	20	25	30
Fertilizer (grams)	100	200	300	400	500

- A about 10 cm
- B about 14 cm
- C about 21 cm
- D about 27 cm

3 Which of the following words listed below is **energy**?



4 On the centimeter ruler below, what is the length to **point B** in **millimeters**?

5

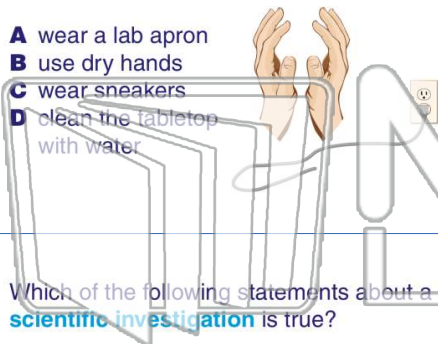


PREVIEW

Please [Sign In](#) or [Sign Up](#) to download the printable version of this worksheet

7

- A wear a lab apron
- B use dry hands
- C wear sneakers
- D clean the tabletop with water



- A hot
- B harmless
- C poisonous
- D drinkable




9 Which of the following statements about a **scientific investigation** is true?

- A It is always a waste of time.
- B It sometimes proves a hypothesis.
- C It never proves anything.
- D It just makes the problem worse.

10 The **lab tool** shown in the picture below would be **used** to _____.

- A cut paper
- B hold a hot object
- C support a large beaker
- D clamp an object to the ring stand

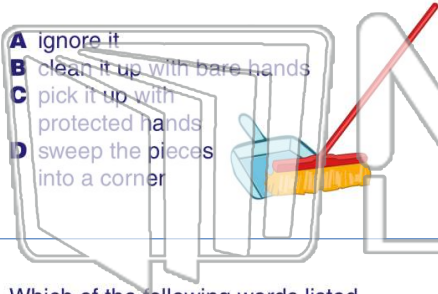




Name _____ Class _____ Date _____

1 When cleaning up a **broken glass beaker**, a student should _____.

- A ignore it
- B clean it up with bare hands
- C pick it up with protected hands
- D sweep the pieces into a corner



2 Using this data table, estimate the **height** of a plant if **320 grams** of fertilizer were used to grow it.

Height of Plant (centimeters)	10	15	20	25	30
Fertilizer (grams)	100	200	300	400	500

- A about 10 cm
- B about 14 cm
- C about 21 cm
- D about 27 cm

3 Which of the following words listed below is **energy**?



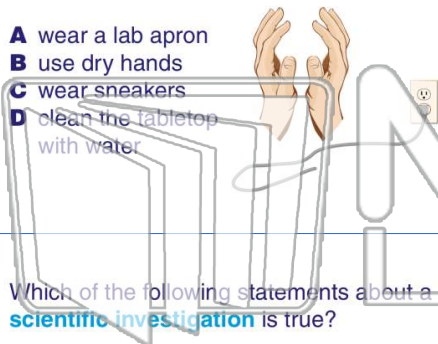
4 On the centimeter ruler below, what is the length to **point B** in **millimeters**?



PREVIEW

Please [Sign In](#) or [Sign Up](#) to download the printable version of this worksheet

- A wear a lab apron
- B use dry hands
- C wear sneakers
- D clean the tabletop with water



- A hot
- B harmless
- C poisonous
- D drinkable



9 Which of the following statements about a **scientific investigation** is true?

- A It is always a waste of time.
- B It sometimes proves a hypothesis.
- C It never proves anything.
- D It just makes the problem worse.

10 The **lab tool** shown in the picture below would be **used** to _____.

- A cut paper
- B hold a hot object
- C support a large beaker
- D clamp an object to the ring stand

