



Name _____ Class _____ Date _____

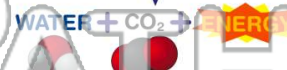
1 What is the **function** of the **respiratory system**?

- A get carbon dioxide and get rid of oxygen
- B get oxygen and get rid of carbon dioxide
- C break down nutrients
- D deliver nutrients to the cells of the body



2 Which is a **waste** created by **respiration**? **GLUCOSE + OXYGEN**

- A oxygen
- B energy
- C nitrogen
- D water



NEW PATH LEARNING

3 Which **body systems** are most important for **respiration**?

4 How much of the **atmosphere** is **oxygen**?



PREVIEW

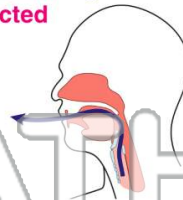
Please [Sign In](#) or [Sign Up](#) to download the printable version of this worksheet

7 you have _____ causing the irritating particles to be **ejected** from the body.

- A with rings of cartilage that help it to stay open
- B shared by two body systems
- C that connects the two lungs
- D that produces the voice



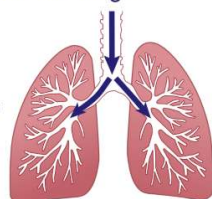
- A burp
- B drool
- C cough
- D itch



NEW PATH LEARNING

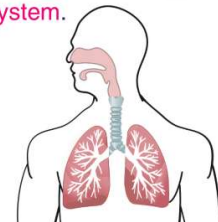
9 Which item best **resembles the bronchi** that spread out inside the lungs?

- A a garden hose
- B a carpet
- C a blade of grass
- D a tree



10 The _____ is the **main structure** of the **respiratory system**.

- A bronchi are
- B lungs are
- C nose is
- D pharynx is






Name _____ Class _____ Date _____

1 What is the **function** of the **respiratory system**?

A get carbon dioxide and get rid of oxygen
B get oxygen and get rid of carbon dioxide
C break down nutrients
D deliver nutrients to the cells of the body



2 Which is a **waste** created by **respiration**?

GLUCOSE + OXYGEN
 ↓
WATER + CO₂ + ENERGY

A oxygen
B energy
C nitrogen
D water

3 Which **body systems** are most important for **respiration**?

4 How much of the **atmosphere** is **oxygen**?

5




PREVIEW

Please [Sign In](#) or [Sign Up](#) to download the printable version of this worksheet

7

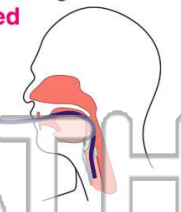
A with rings of cartilage that help it to stay open
B shared by two body systems
C that connects the two lungs
D that produces the voice



8

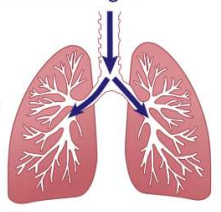
particles to be **ejected** from the body.

A burp
B drool
C cough
D itch



9 Which item best **resembles the bronchi** that spread out inside the lungs?

A a garden hose
B a carpet
C a blade of grass
D a tree



10 The _____ is the **main structure** of the **respiratory system**.

A bronchi are
B lungs are
C nose is
D pharynx is

