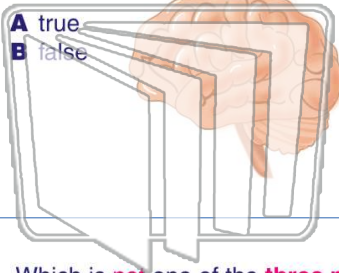




Name \_\_\_\_\_ Class \_\_\_\_\_ Date \_\_\_\_\_

1 The **brain** and the **spinal cord** are organs of the **central nervous system**.



- A true
- B false

2 Which is not a **function** of the **spinal cord**?

- A bringing information to the brain
- B interpreting all of the nerve impulses
- C bringing information to the rest of the body
- D attaching the central and peripheral nervous system

3 Which is not one of the **three parts** of the human brain?



4 The type of **neuron** that is in the **brain** is \_\_\_\_\_.

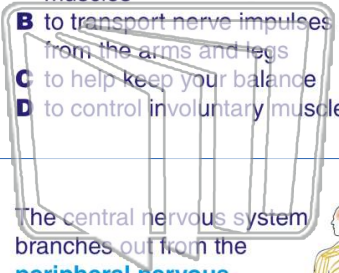


## PREVIEW

Please [Sign In](#) or [Sign Up](#) to download the printable version of this worksheet

7

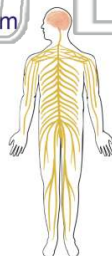
- A to control voluntary muscles
- B to transport nerve impulses from the arms and legs
- C to help keep your balance
- D to control involuntary muscles



- A to control voluntary muscles
- B to transport nerve impulses from the arms and legs
- C to help keep your balance
- D to control involuntary muscles

9 The central nervous system branches out from the **peripheral nervous system**.

- A true
- B false



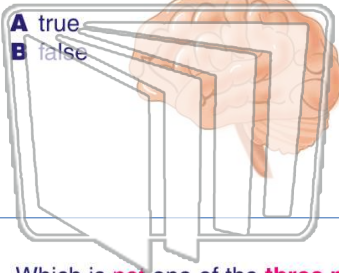
10 Which are the **two parts** of the **peripheral nervous system**?

- A somatic and dramatic
- B automatic and manual
- C somatic and automatic
- D manual and dramatic



Name \_\_\_\_\_ Class \_\_\_\_\_ Date \_\_\_\_\_

1 The **brain** and the **spinal cord** are organs of the **central nervous system**.



- A true
- B false

2 Which is not a **function** of the **spinal cord**?

- A bringing information to the brain
- B interpreting all of the nerve impulses
- C bringing information to the rest of the body
- D attaching the central and peripheral nervous system

3 Which is not one of the **three parts** of the human brain?



4 The type of **neuron** that is in the **brain** is \_\_\_\_\_.



5




## PREVIEW

Please [Sign In](#) or [Sign Up](#) to download the printable version of this worksheet

7

- A to control voluntary muscles
- B to transport nerve impulses from the arms and legs
- C to help keep your balance
- D to control involuntary muscles

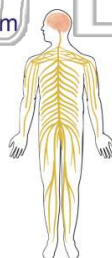


- A to control voluntary muscles
- B to transport nerve impulses from the arms and legs
- C to help keep your balance
- D to control involuntary muscles

9

The central nervous system branches out from the **peripheral nervous system**.

- A true
- B false



10

Which are the **two parts** of the **peripheral nervous system**?

- A somatic and dramatic
- B automatic and manual
- C somatic and automatic
- D manual and dramatic