



Name _____ Class _____ Date _____


1 Fill in the answer.
An **imaginary line** around the widest part of the **Earth** is called the _____.



6 **Very dry land** that receives very little or no rainfall is a _____.

forest desert

dessert mountain



2 An **imaginary line** on the Earth from the **North Pole** to the **South Pole** is the _____.
Check the answer.


Prime Number

Prime Meridian



7 A **deep, narrow valley** with steep or rocky sides carved by a river is a _____.

canyon desert



3 V
T
th
C
s



ounded



PREVIEW

Please [Sign In](#) or [Sign Up](#) to download the printable version of this worksheet

ess land

4 A

90 degrees north

23 degrees south

0 degrees



tundra prairie

delta forest



5 **Parallel lines** circling the Earth **north and south of the equator** are lines of _____.



10 A large area of the **sea or ocean** that is **partly enclosed by land** is a _____.

river peninsula

tundra gulf





Geographic Information - Answer Key

SS
C

Name _____ Class _____ Date _____

1 Fill in the answer.

An **imaginary line** around the widest part of the **Earth** is called the

equator.




6 **Very dry land** that receives very little or no rainfall is a _____.

forest

desert

dessert

mountain



2 An **imaginary line** on the Earth from the **North Pole** to the **South Pole** is the _____.

Check the answer.

Prime Number


Prime Meridian



7 A **deep, narrow valley** with steep or rocky sides carved by a river is a _____.

canyon

desert



3

V
T
th
C
S



PREVIEW

Please [Sign In](#) or [Sign Up](#) to download the printable version of this worksheet

4

A

90 degrees north

23 degrees south

0 degrees



tundra

prairie

delta

forest



5

Parallel lines circling the Earth **north and south of the equator** are lines of

latitude.



10 A large area of the **sea or ocean** that is **partly enclosed by land** is a _____.

river

peninsula

tundra

gulf

