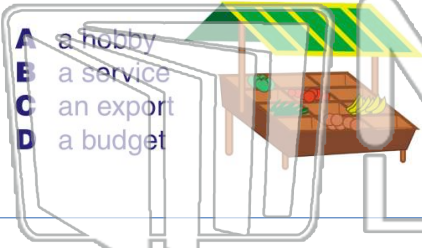




Name _____ Class _____ Date _____

1 Selling fruits and vegetables at a farm market is _____.

- A a hobby
- B a service
- C an export
- D a budget



2 A child who makes lemonade and sells it at a stand in front of his house is _____.

- A earning an income
- B wasting his time
- C spending income
- D wasting resources



3 A child who has a paper route is _____.

4 Children in school who help the teacher are _____.

NEW PATH LEARNING

PREVIEW

Please [Sign In](#) or [Sign Up](#) to download the printable version of this worksheet

7 _____ must pay sales taxes.

- A true
- B false



- A money that is taken out of a salary to give to the government
- B money that people pay a bank for letting them have a loan
- C a percent of the price of an item that is added to the cost of the item
- D money paid to the government on April 15

9 In some states the sales tax is 3%. That means if you buy a toy for \$1 you have to pay _____.

- A \$.92
- B \$1.08
- C \$1.80
- D \$2.00



10 In some states the sales tax is 7%. If you buy a toy for \$2 you have to pay _____.

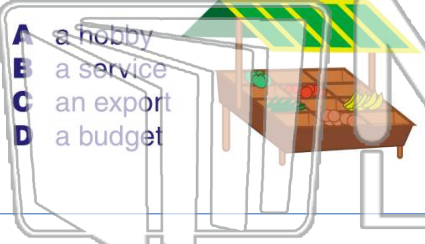
- A \$1.93
- B \$1.86
- C \$2.07
- D \$2.14





Name _____ Class _____ Date _____

1 Selling fruits and vegetables at a farm market is _____.



- A a hobby
- B a service
- C an export
- D a budget

2 A child who makes lemonade and sells it at a stand in front of his house is _____.



- A earning an income
- B wasting his time
- C spending income
- D wasting resources

3 A child who has a paper route is _____.



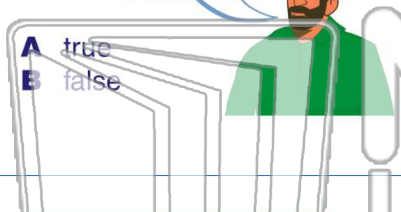
4 Children in school who help the teacher are _____.



PREVIEW

Please [Sign In](#) or [Sign Up](#) to download the printable version of this worksheet

7 _____ must pay sales taxes.



- A true
- B false

- A money that is taken out of a salary to give to the government
- B money that people pay a bank for letting them have a loan
- C a percent of the price of an item that is added to the cost of the item
- D money paid to the government on April 15

9 In some states the sales tax is 3%. That means if you buy a toy for \$1 you have to pay _____.

- A \$.92
- B \$1.08
- C \$1.80
- D \$2.00



10 In some states the sales tax is 7%. If you buy a toy for \$2 you have to pay _____.

- A \$1.93
- B \$1.86
- C \$2.07
- D \$2.14

