



Landmarks

SS
C

Name _____ Class _____ Date _____

1 Circle the **monument** located in **Washington, D.C.**



6 Circle the **highest mountain in the world.**

Mt. Washington


Mt. Rushmore

Mt. Everest



2 _____ is located in the **Black Hills of South Dakota.**

Circle the answer letter.



7 What is the **palace** built in **India** as a **burial place** for a **shah's wife**?

a. Taj Mahal

b. Big Ben



3 v
n
v



built



4 v
Please Sign In or Sign Up to download the printable version of this worksheet

of a man

- a. Great Wall of China
- b. Great Wall of China
- c. Berlin Wall



- a. Taj Mahal
- b. Sphinx
- c. Great Pyramids



5 Circle a **famous landmark** in the **water** between **New York State** and **Ontario, Canada.**

Niagara Falls


Mermaid Island

Grand Canyon

Mt. Rushmore

10 **George Washington's home** on the **Potomac River** is called _____.

- a. Washington Monument
- b. Monticello
- c. Mt. Vernon





Landmarks - Answer Key

SS
C

Name _____ Class _____ Date _____

1 Circle the **monument** located in **Washington, D.C.**



6 Circle the **highest mountain in the world.**

Mt. Washington


Mt. Rushmore

Mt. Everest



2 _____ is located in the **Black Hills of South Dakota.**

Circle the answer letter.



7 What is the **palace** built in **India** as a **burial place** for a **shah's wife**?

a. Taj Mahal

b. Big Ben



3
V
n
v
S



PREVIEW

Please [Sign In](#) or [Sign Up](#) to download the printable version of this worksheet

4
v

- b. Great Wall of China
- c. Berlin Wall




10 **George Washington's home** on the Potomac River is called _____.

a. Washington Monument

b. Monticello

c. Mt. Vernon



5 Circle a **famous landmark** in the **water** between **New York State** and **Ontario, Canada.**

Niagara Falls

Mermaid Island

Grand Canyon

Mt. Rushmore