



Name _____ Class _____ Date _____

1

What is a **map**?

- A a tool for locating places
- B a picture of a famous person
- C something to put at your place at a table
- D a tool for cleaning floors



2

What is a **globe**?

- A a big pile of dust
- B a heap of glue
- C a small model of the Earth
- D a tool for spinning



3

What is a **compass**?

- A a bag to carry



4

What is a **Mercator Projection**?



5



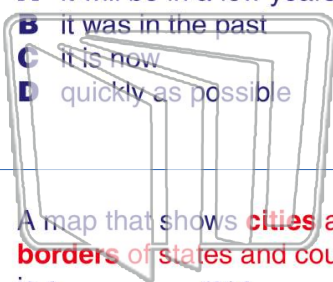
PREVIEW

Please [Sign In](#) or [Sign Up](#) to download the printable version of this worksheet

7

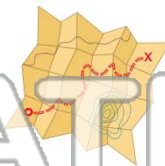
as _____.

- A it will be in a few years
- B it was in the past
- C it is now
- D quickly as possible



in 1603 is a _____ map.

- A globe
- B sloppy
- C history
- D hippy



9

A map that shows **cities and borders** of states and countries is a _____ map.

- A polite
- B political
- C historical
- D hysterical



10

A pattern of **lines that form squares** is called a _____.

- A girdle
- B grid
- C girl map
- D boy map



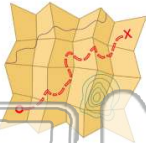


Name _____ Class _____ Date _____

1

What is a **map**?

- A a tool for locating places
- B a picture of a famous person
- C something to put at your place at a table
- D a tool for cleaning floors



2

What is a **globe**?

- A a big pile of dust
- B a heap of glue
- C a small model of the Earth
- D a tool for spinning



3

What is a **compass**?

- A a bag to carry



4

What is a **Mercator Projection**?



5



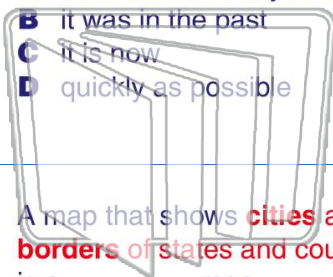
PREVIEW

Please [Sign In](#) or [Sign Up](#) to download the printable version of this worksheet

7

as _____.

- A it will be in a few years
- B it was in the past
- C it is now
- D quickly as possible



in 1605 is a _____ map.

- A globe
- B sloppy
- C history
- D hippy



9

A map that shows **cities** and **borders** of states and countries is a _____ map.

- A polite
- B political
- C historical
- D hysterical



10

A pattern of **lines** that form **squares** is called a _____.

- A girldle
- B grid
- C girl map
- D boy map

