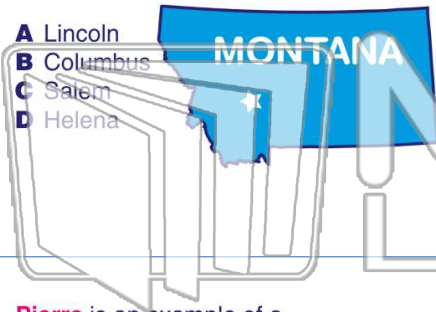




Name _____ Class _____ Date _____

1 What is the capital of **Montana**?

- A Lincoln
- B Columbus
- C Salem
- D Helena



2 **Santa Fe** is the capital of which state?

- A Ohio
- B Virginia
- C New Mexico
- D Santa Fe is not a capital.



3 **Pierre** is an example of a _____.

- A state



4 **Providence** is the capital of Rhode Island.

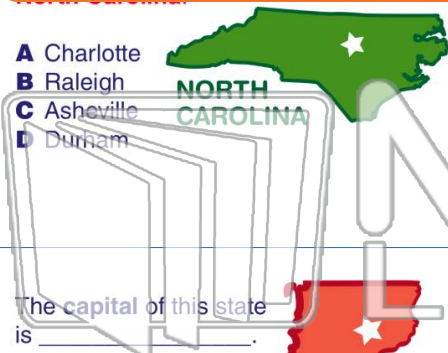


PREVIEW

Please [Sign In](#) or [Sign Up](#) to download the printable version of this worksheet

7

- A Charlotte
- B Raleigh
- C Asheville
- D Durham



- A Pierre, Oregon
- B Salt Lake City, Utah
- C Santa Fe, New York
- D Helena, North Dakota



9 The **capital** of this state is _____.

- A Nashville
- B Boise
- C Montpelier
- D Madison



10 The **capital** of this state is _____.

- A Olympia
- B Bismarck
- C Nashville
- D Richmond

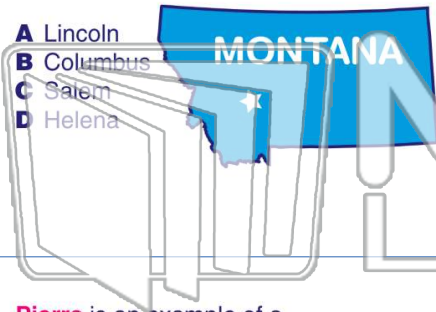




Name _____ Class _____ Date _____

1 What is the capital of **Montana**?

- A Lincoln
- B Columbus
- C Salem
- D Helena



2 **Santa Fe** is the capital of which state?

- A Ohio
- B Virginia
- C New Mexico
- D Santa Fe is not a capital.



3 **Pierre** is an example of a _____.

- A state



4 **Providence** is the capital of Rhode Island.

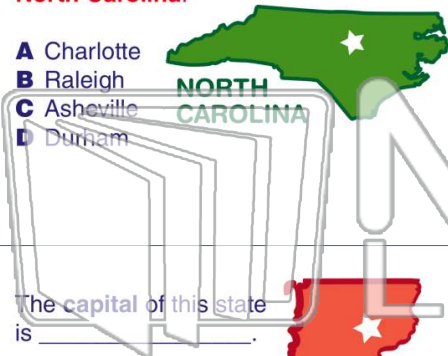


PREVIEW

Please [Sign In](#) or [Sign Up](#) to download the printable version of this worksheet

7

- A Charlotte
- B Raleigh
- C Asheville
- D Durham



- A Pierre, Oregon
- B Salt Lake City, Utah
- C Santa Fe, New York
- D Helena, North Dakota



9 The **capital** of this state is _____.

- A Nashville
- B Boise
- C Montpelier
- D Madison



10 The **capital** of this state is _____.

- A Olympia
- B Bismarck
- C Nashville
- D Richmond

