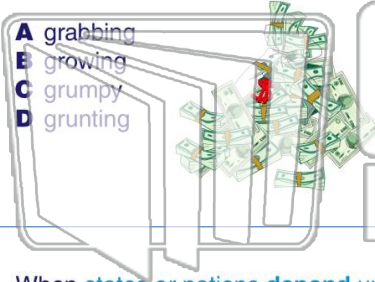




Name _____ Class _____ Date _____

1 **Economic growth** indicates how much the economy is _____.

- A grabbing
- B growing
- C grumpy
- D grunting



2 When the economy of a state changes from **farming** to **manufacturing**, it is known as **economic change**.

- A true
- B false



3 When states or nations **depend** upon one another, it is called _____.

4 The amount of money a person **earns from working** is called his or her _____.

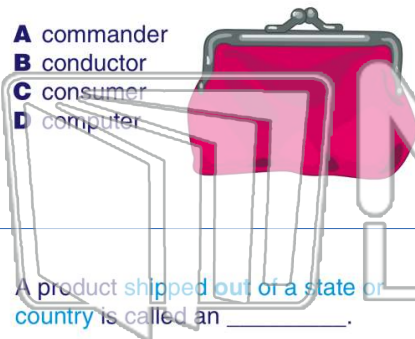


PREVIEW

Please [Sign In](#) or [Sign Up](#) to download the printable version of this worksheet

7 _____

- A commander
- B conductor
- C consumer
- D computer



- A import
- B umbrella
- C island
- D orchid



9 A product **shipped out of a state or country** is called an _____.

- A excellent
- B elephant
- C import
- D export



10 The **economic system** in the United States is known as a **free enterprise system**.

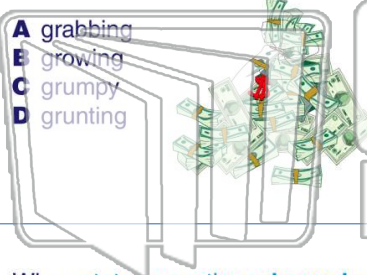
- A true
- B false






Name _____ Class _____ Date _____

1 **Economic growth** indicates how much the economy is _____.



- A grabbing
- B growing
- C grumpy
- D grunting

2 When the economy of a state changes from **farming** to **manufacturing**, it is known as **economic change**.



- A true
- B false

3 When states or nations **depend** upon one another, it is called _____.

4 The amount of money a person **earns from working** is called his or her _____.



5

PREVIEW

Please [Sign In](#) or [Sign Up](#) to download the printable version of this worksheet

7

- A commander
- B conductor
- C consumer
- D computer



- A import
- B umbrella
- C island
- D orchid



9 A product **shipped out of a state or country** is called an _____.

- A excellent
- B elephant
- C import
- D export



10 The **economic system** in the United States is known as a **free enterprise system**.

- A true
- B false

