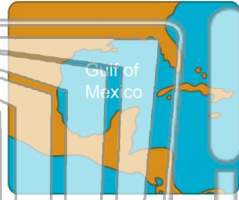




Name _____ Class _____ Date _____


1 An **inlet of the ocean** extending into the land is a _____.

- A tributary
- B gulf
- C mouth
- D source



2 A **high, flat mass of land** is called a _____.

- A lake
- B delta
- C plateau
- D swamp



3 The **five lakes on the northern border of the United States** that make up almost 20% of the world's fresh water supply _____.

4 The **Great Lakes** are Lake Superior, Lake Michigan, Lake Huron, Lake Erie, and _____.



PREVIEW

Please [Sign In](#) or [Sign Up](#) to download the printable version of this worksheet

7 _____
A Missouri River
B Amazon River
C Colorado River
D Nile River



Mexico is the _____.

- A Rocky Mountains
- B Andes Mountains
- C Catskill Mountains
- D Appalachian Mountains



9 The **ocean west of the continental United States** is the _____.

- A Indian Ocean
- B Atlantic Ocean
- C Pacific Ocean
- D Arctic Ocean



10 This is an **imaginary line** high in the **Rocky Mountains**. Water running down from this line runs west toward the Pacific Ocean or east toward the Atlantic Ocean.

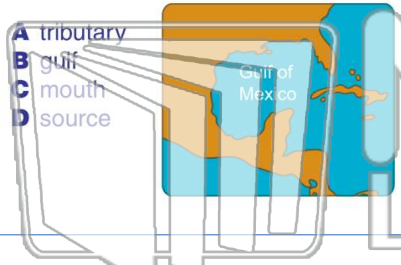
- A Equator
- B Tropic of Cancer
- C Prime Meridian
- D Continental Divide






Name _____ Class _____ Date _____

1 An **inlet of the ocean** extending into the land is a _____.



- A tributary
- B gulf
- C mouth
- D source

2 A **high, flat mass of land** is called a _____.



- A lake
- B delta
- C plateau
- D swamp

3 The **five lakes on the northern border of the United States** that make up almost 20% of the world's fresh water supply _____.

4 The **Great Lakes** are Lake Superior, Lake Michigan, Lake Huron, Lake Erie, and _____.

PREVIEW

Please [Sign In](#) or [Sign Up](#) to download the printable version of this worksheet

7 _____




- A Missouri River
- B Amazon River
- C Colorado River
- D Nile River

Mexico is the _____.



- A Rocky Mountains
- B Andes Mountains
- C Catskill Mountains
- D Appalachian Mountains

9 The **ocean west of the continental United States** is the _____.



- A Indian Ocean
- B Atlantic Ocean
- C Pacific Ocean
- D Arctic Ocean

10 This is an **imaginary line** high in the **Rocky Mountains**. Water running down from this line runs west toward the Pacific Ocean or east toward the Atlantic Ocean.



- A Equator
- B Tropic of Cancer
- C Prime Meridian
- D Continental Divide