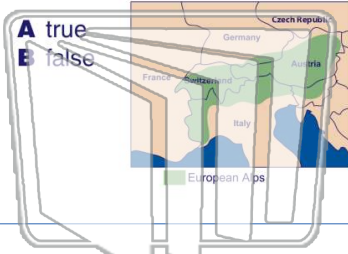




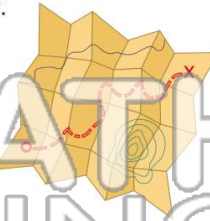
Name \_\_\_\_\_ Class \_\_\_\_\_ Date \_\_\_\_\_

1 A drawing of what a particular place looks like from above is called a **map**.



A true  
B false

2 A **mapmaker** is known as a **cartographer**.



A true  
B false

3 **Cartographers** use \_\_\_\_\_ on a map to stand for real objects.



4 A **model** of the Earth in the shape of a sphere is called a \_\_\_\_\_.

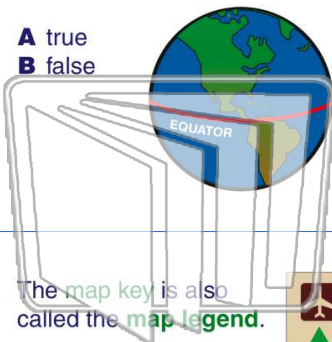


## PREVIEW

Please [Sign In](#) or [Sign Up](#) to download the printable version of this worksheet

7 \_\_\_\_\_

A true  
B false



The **map key** is also called the **map legend**.

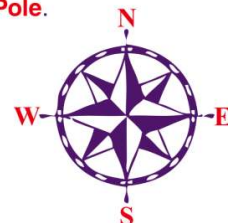
A true  
B false



A keg  
B lock  
C key  
D knot

10 The **northernmost** point on the Earth is the **North Pole**.

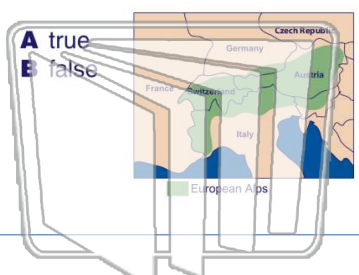
A true  
B false



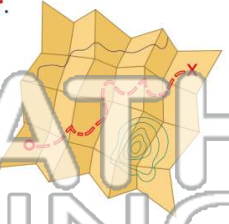


Name \_\_\_\_\_ Class \_\_\_\_\_ Date \_\_\_\_\_

1 A drawing of what a particular place looks like from above is called a **map**.




2 A **mapmaker** is known as a **cartographer**.



A true  
B false

A

3 **Cartographers** use \_\_\_\_\_ on a map to stand for real objects.



4 A **model** of the Earth in the shape of a sphere is called a \_\_\_\_\_.



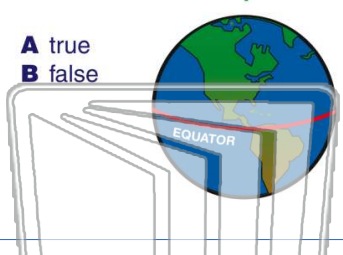
5

**PREVIEW**

Please [Sign In](#) or [Sign Up](#) to download the printable version of this worksheet

7

8 The **equator** is a line of latitude that divides the Earth into the Northern and Southern Hemispheres.



9 The **map key** is also called the **map legend**.

A true  
B false



10 The **northernmost** point on the Earth is the **North Pole**.

A true  
B false

