



Name _____ Class _____ Date _____

1 The **twelve states** in the **Middle Western Region** are Illinois, Indiana, Iowa, Kansas, Michigan, Minnesota, Missouri, Nebraska, North Dakota, South Dakota, Ohio, and Wisconsin.

A true
B false



2 The **large freshwater lakes** to the northeast of the **Middle Western Region** are called the _____.

A Big Lakes
B Large Lakes
C Great Lakes
D Finger Lakes



3 The **country** north of the **Middle Western Region** is _____.



4 A large **city** in **Illinois** that is **located on Lake Michigan** is _____.



5

PREVIEW


Please [Sign In](#) or [Sign Up](#) to download the printable version of this worksheet

7

A true
B false

9 The **economy of the plains** of the **Middle Western Region** is based on _____.

A tourism
B agriculture
C fishing
D manufacturing



10 _____ of the United States is the _____.

A Northeastern Region
B Southwestern Region
C Western Region
D Middle Western Region

10 Coal and iron ore mined in the **Middle Western Region** are used to produce _____.

A oil
B jewelry
C steel
D textiles





Name _____ Class _____ Date _____

1 The **twelve states** in the **Middle Western Region** are Illinois, Indiana, Iowa, Kansas, Michigan, Minnesota, Missouri, Nebraska, North Dakota, South Dakota, Ohio, and Wisconsin.

- A true
- B false



2 The **large freshwater lakes** to the northeast of the **Middle Western Region** are called the _____.

- A Big Lakes
- B Large Lakes
- C Great Lakes
- D Finger Lakes



3 The **country** north of the **Middle Western Region** is _____.



4 A large **city** in **Illinois** that is **located on Lake Michigan** is _____.

A Chicago





PREVIEW

Please [Sign In](#) or [Sign Up](#) to download the printable version of this worksheet

7 _____ of the United States is the _____.

- A true
- B false



- A Northeastern Region
- B Southwestern Region
- C Western Region
- D Middle Western Region



9 The **economy of the plains** of the **Middle Western Region** is based on _____.

- A tourism
- B agriculture
- C fishing
- D manufacturing



10 **Coal and iron ore** mined in the **Middle Western Region** are used to produce _____.

- A oil
- B jewelry
- C steel
- D textiles

