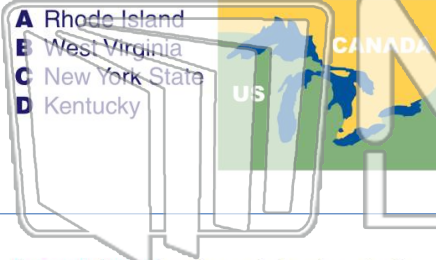





Name \_\_\_\_\_ Class \_\_\_\_\_ Date \_\_\_\_\_

1 **Lake Ontario** is on the border of \_\_\_\_\_ and Canada.



2 What **river** flows over **Niagara Falls**?

- A Mississippi River
- B Niagara River
- C Colorado River
- D Amazon River



3 **Long Island** is a large island east of New York City.



4 A **sound** is a body of water between an island and the mainland.



5 **PREVIEW**  
Please [Sign In](#) or [Sign Up](#) to download the printable version of this worksheet

7 **A true**  
**B false**

**A Indian Ocean**  
**B Arctic Ocean**  
**C Atlantic Ocean**  
**D Pacific Ocean**

9 The **surface** of the area that is now New York State was changed when **large masses of ice** called \_\_\_\_\_ retreated toward the north.

- A glaciers
- B snowballs
- C volcanoes
- D plates

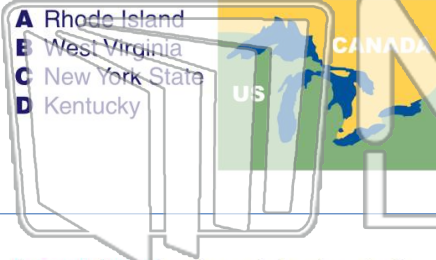
10 The **highest point** in New York State is \_\_\_\_\_.

- A Mt. Everest
- B Mt. Marcy
- C Mt. St. Helens
- D Pikes Peak




Name \_\_\_\_\_ Class \_\_\_\_\_ Date \_\_\_\_\_

1 **Lake Ontario** is on the border of \_\_\_\_\_ and Canada.



2 What **river** flows over **Niagara Falls**?

- A Mississippi River
- B Niagara River
- C Colorado River
- D Amazon River



3 **Long Island** is a large island east of New York City.



4 A **sound** is a body of water between an island and the mainland.

A

**PREVIEW**

Please [Sign In](#) or [Sign Up](#) to download the printable version of this worksheet

B



7 \_\_\_\_\_

- A true
- B false



- A Indian Ocean
- B Arctic Ocean
- C Atlantic Ocean
- D Pacific Ocean



9 The **surface** of the area that is now New York State was changed when **large masses of ice** called \_\_\_\_\_ retreated toward the north.

- A glaciers
- B snowballs
- C volcanoes
- D plates



10 The **highest point** in New York State is \_\_\_\_\_.

- A Mt. Everest
- B Mt. Marcy
- C Mt. St. Helens
- D Pikes Peak

