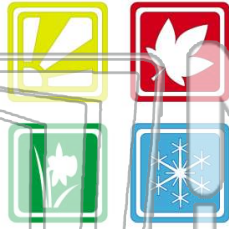




Name _____ Class _____ Date _____

1 There are _____ seasons in the Northeastern States.

- A one
- B two
- C three
- D four



2 A famous waterfall in the Northeastern Region is _____.

- A Niagara Falls
- B Angel Falls
- C Victoria Falls
- D Southern Falls



3 A shellfish caught in traps in the waters off the coast of Maine is a _____.

4 Lake Ontario and Lake Erie are two of the _____.



PREVIEW

Please [Sign In](#) or [Sign Up](#) to download the printable version of this worksheet

7 A Richmond
B Newark
C Atlanta
D Houston



A the Washington Monument
B Fort Sumter
C the Liberty Bell
D the Lincoln Memorial



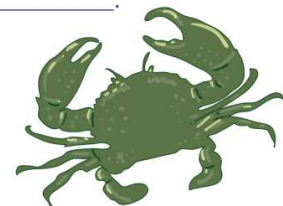
9 Raising crops and animals is also known as _____.

- A hunting
- B fishing
- C gardening
- D agriculture



10 Chesapeake Bay produces shellfish known as _____.

- A crabs
- B catfish
- C perch
- D halibut





Name _____ Class _____ Date _____

1 There are _____ seasons in the Northeastern States.

- A one
- B two
- C three
- D four



2 A famous waterfall in the Northeastern Region is _____.

- A Niagara Falls
- B Angel Falls
- C Victoria Falls
- D Southern Falls



3 A shellfish caught in traps in the waters off the coast of Maine is a _____.

4 Lake Ontario and Lake Erie are two of the _____.



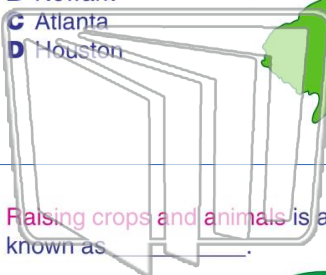
PREVIEW

Please [Sign In](#) or [Sign Up](#) to download the printable version of this worksheet

5

7

- A Richmond
- B Newark
- C Atlanta
- D Houston



- A the Washington Monument
- B Fort Sumter
- C the Liberty Bell
- D the Lincoln Memorial



9 Raising crops and animals is also known as _____.

- A hunting
- B fishing
- C gardening
- D agriculture



10 Chesapeake Bay produces shellfish known as _____.

- A crabs
- B catfish
- C perch
- D halibut

