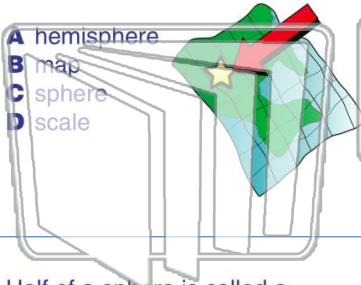




Name _____ Class _____ Date _____

1 A **drawing** of what a particular place looks like from above is a _____.

- A hemisphere
- B map
- C sphere
- D scale



2 A **model** of the Earth in the shape of a sphere is called a _____.

- A bridge
- B map
- C globe
- D key



3 Half of a sphere is called a **hemisphere**.



4 The **northern half** of the Earth is called the _____.



5



PREVIEW

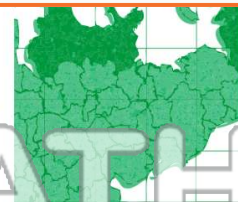
Please [Sign In](#) or [Sign Up](#) to download the printable version of this worksheet

7

- A Eastern Hemisphere
- B Northern Hemisphere
- C Western Hemisphere
- D Southern Hemisphere



- A cartographer
- B seismologist
- C archaeologist
- D carburetor




9 Cartographers use map to **represent** real objects on a map.

- A states
- B symbols
- C stores
- D countries



10 The place on a map where **map symbols are explained** is the map _____.

- A keg
- B lock
- C key
- D knot

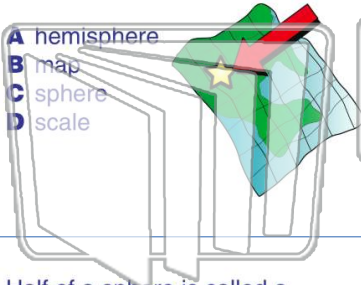




Name _____ Class _____ Date _____

1 A **drawing** of what a particular place looks like from above is a _____.

- A hemisphere
- B map
- C sphere
- D scale



2 A **model** of the Earth in the shape of a sphere is called a _____.

- A bridge
- B map
- C globe
- D key



3 Half of a sphere is called a **hemisphere**.



4 The **northern half** of the Earth is called the _____.



5



PREVIEW

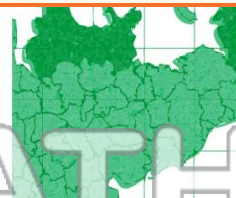
Please [Sign In](#) or [Sign Up](#) to download the printable version of this worksheet

7

- A Eastern Hemisphere
- B Northern Hemisphere
- C Western Hemisphere
- D Southern Hemisphere



- A cartographer
- B seismologist
- C archaeologist
- D carburetor



9 Cartographers use map to **represent** real objects on a map.

- A states
- B symbols
- C stores
- D countries



10 The place on a map where **map symbols are explained** is the map _____.

- A keg
- B lock
- C key
- D knot

